

Cell Structure and Function

▲ **Figure 7.1** How do your cells help you learn about biology?

KEY CONCEPTS

- 7.1** Biologists use microscopes and biochemistry to study cells
- 7.2** Eukaryotic cells have internal membranes that compartmentalize their functions
- 7.3** The eukaryotic cell's genetic instructions are housed in the nucleus and carried out by the ribosomes
- 7.4** The endomembrane system regulates protein traffic and performs metabolic functions
- 7.5** Mitochondria and chloroplasts change energy from one form to another
- 7.6** The cytoskeleton is a network of fibers that organizes structures and activities in the cell
- 7.7** Extracellular components and connections between cells help coordinate cellular activities
- 7.8** A cell is greater than the sum of its parts

The Fundamental Units of Life

Cells are as fundamental to the living systems of biology as the atom is to chemistry. Many different types of cells are working for you right now. The contraction of muscle cells moves your eyes as you read this sentence. **Figure 7.1** shows extensions from a nerve cell (orange) making contact with muscle cells (red). The words on the page are translated into signals that nerve cells carry to your brain, where they are passed on to other nerve cells. As you study, your cells make connections between nerve cells that solidify memories and permit learning to occur.

All organisms are made of cells. In the hierarchy of biological organization, the cell is the simplest collection of matter that can be considered a living entity. Indeed, many forms of life exist as single-celled organisms, like the *Paramecium* shown here, a eukaryote that lives in pond water. Larger, more complex organisms, including plants and animals, are multicellular; their bodies are associations of many kinds of specialized cells that could not survive for long on their own. Even when cells are arranged into higher levels of organization, such as tissues and organs, the cell remains the organism's basic unit of structure and function.

All cells are related by their descent from earlier cells. During the long evolutionary history of life on Earth, cells have been modified in many different ways. But although cells can differ substantially from one another, they share common features. In this chapter, we'll first examine the tools and techniques that allow us to understand cells, then tour the cell and become acquainted with its components.

When you see this blue icon, log in to **MasteringBiology** and go to the Study Area for digital resources.



Get Ready for This Chapter



CONCEPT 7.1

Biologists use microscopes and biochemistry to study cells

How can cell biologists investigate the inner workings of a cell, usually too small to be seen by the unaided eye? Before we tour the cell, it will be helpful to learn how cells are studied.

Microscopy

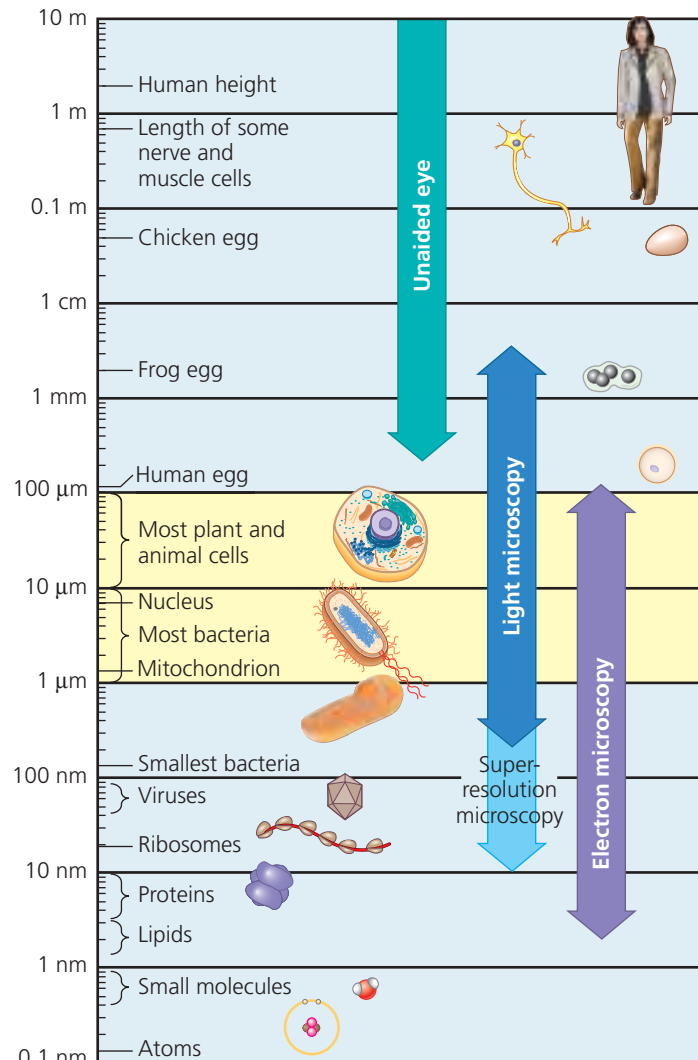
The development of instruments that extend the human senses allowed the discovery and early study of cells. Microscopes were invented in 1590 and further refined during the 1600s. Cell walls were first seen by Robert Hooke in 1665 as he looked through a microscope at dead cells from the bark of an oak tree. But it took the wonderfully crafted lenses of Antoni van Leeuwenhoek to visualize living cells. Imagine Hooke's excitement when he visited van Leeuwenhoek in 1674 and the world of microorganisms—what his host called “very little animalcules”—was revealed to him.

The microscopes first used by Renaissance scientists, as well as the microscopes you are likely to use in the laboratory, are all light microscopes. In a **light microscope (LM)**, visible light is passed through the specimen and then through glass lenses. The lenses refract (bend) the light in such a way that the image of the specimen is magnified as it is projected into the eye or into a camera (see Appendix D).

Three important parameters in microscopy are magnification, resolution, and contrast. *Magnification* is the ratio of an object's image size to its real size. Light microscopes can magnify effectively to about 1,000 times the actual size of the specimen; at greater magnifications, additional details cannot be seen clearly. *Resolution* is a measure of the clarity of the image; it is the minimum distance two points can be separated and still be distinguished as separate points. For example, what appears to the unaided eye as one star in the sky may be resolved as twin stars with a telescope, which has a higher resolving ability than the eye. Similarly, using standard techniques, the light microscope cannot resolve detail finer than about 0.2 micrometer (μm), or 200 nanometers (nm), regardless of the magnification (**Figure 7.2**). The third parameter, *contrast*, is the difference in brightness between the light and dark areas of an image. Methods for enhancing contrast include staining or labeling cell components to stand out visually. **Figure 7.3** shows some different types of microscopy; study this figure as you read this section.

Until recently, the resolution barrier prevented cell biologists from using standard light microscopy when studying **organelles**, the membrane-enclosed structures within eukaryotic cells. To see these structures in any detail required the development of a new instrument. In the 1950s, the electron microscope was introduced to biology. Rather than focusing light, the **electron microscope (EM)** focuses a

Figure 7.2 The size range of cells. Most cells are between 1 and 100 μm in diameter (yellow region of chart) and their components are even smaller (see Figure 7.32), as are viruses. Notice that the scale along the left side is logarithmic, to accommodate the range of sizes shown. Starting at the top of the scale with 10 m and going down, each reference measurement marks a tenfold decrease in diameter or length. For a complete table of the metric system, see Appendix C.



1 centimeter (cm) = 10^{-2} meter (m) = 0.4 inch

1 millimeter (mm) = 10^{-3} m

1 micrometer (μm) = 10^{-3} mm = 10^{-6} m

1 nanometer (nm) = 10^{-3} μm = 10^{-9} m

Animation: Metric System Review

beam of electrons through the specimen or onto its surface (see Appendix D). Resolution is inversely related to the wavelength of the light (or electrons) a microscope uses for imaging, and electron beams have much shorter wavelengths than visible light. Modern electron microscopes can theoretically achieve a resolution of about 0.002 nm, though in practice they usually cannot resolve structures smaller than about 2 nm across. Still, this is a 100-fold improvement over the standard light microscope.

The **scanning electron microscope (SEM)** is especially useful for detailed study of the topography

Light Microscopy (LM)

Brightfield (unstained specimen). Light passes directly through the specimen. Unless the cell is naturally pigmented or artificially stained, the image has little contrast. (The first four light micrographs show human cheek epithelial cells; the scale bar pertains to all four micrographs.)



Brightfield (stained specimen). Staining with various dyes enhances contrast. Most staining procedures require that cells be fixed (preserved), thereby killing them.



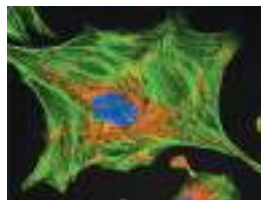
Phase-contrast. Variations in density within the specimen are amplified to enhance contrast in unstained cells; this is especially useful for examining living, unpigmented cells.



Differential interference contrast (Nomarski). As in phase-contrast microscopy, optical modifications are used to exaggerate differences in density; the image appears almost 3-D.





Fluorescence. The locations of specific molecules in the cell can be revealed by labeling the molecules with fluorescent dyes or antibodies; some cells have molecules that fluoresce on their own. Fluorescent substances absorb ultraviolet radiation and emit visible light. In this fluorescently labeled uterine cell, nuclear material is blue, organelles called mitochondria are orange, and the cell's "skeleton" is green.




10 μm

Confocal. The top image is a standard fluorescence micrograph of fluorescently labeled nervous tissue (nerve cells are green, support cells are yellow); below it is a confocal image of the same tissue. Using a laser, this "optical sectioning" technique eliminates out-of-focus light from a thick sample, creating a single plane of fluorescence in the image. By capturing sharp images at many different planes, a 3-D reconstruction can be created. The standard image is blurry because out-of-focus light is not excluded.



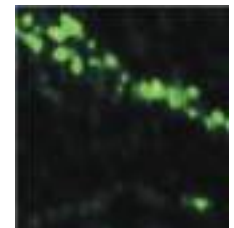
50 μm

Deconvolution. The top of this split image is a compilation of standard fluorescence micrographs through the depth of a white blood cell. Below is an image of the same cell reconstructed from many blurry images at different planes, each of which was processed using deconvolution software. This process digitally removes out-of-focus light and reassigns it to its source, creating a much sharper 3-D image.



10 μm


Super-resolution. On the top is a confocal image of part of a nerve cell, using a fluorescent label that binds to a molecule clustered in small sacs in the cell (vesicles) that are 40 nm in diameter. The greenish-yellow spots are blurry because 40 nm is below the 200-nm limit of resolution for standard light microscopy. Below is an image of the same part of the cell, seen using a new super-resolution technique. Sophisticated equipment is used to light up individual fluorescent molecules and record their position. Combining information from many molecules in different places "breaks" the limit of resolution, resulting in the sharp greenish-yellow dots seen here. (Each dot is a 40-nm vesicle.)



1 μm

Electron Microscopy (EM)

Scanning electron microscopy (SEM). Micrographs taken with a scanning electron microscope show a 3-D image of the surface of a specimen. This SEM shows the surface of a cell from a trachea (windpipe) covered with cell projections called cilia. Electron micrographs are black and white but are often artificially colored to highlight particular structures, as has been done with both electron micrographs shown here.



Transmission electron microscopy (TEM).

A transmission electron microscope profiles a thin section of a specimen. This TEM shows a section through a tracheal cell, revealing its internal structure. In preparing the specimen, some cilia were cut along their lengths, creating longitudinal sections, while other cilia were cut straight across, creating cross sections.

Abbreviations used in figure legends in this text:
 LM = Light Micrograph
 SEM = Scanning Electron Micrograph
 TEM = Transmission Electron Micrograph

VISUAL SKILLS ▶ When the tissue was sliced for the TEM, what was the orientation of the cilia in the upper left? On the right? Explain how the orientation determined the type of section we see.

of a specimen (see Figure 7.3). The electron beam scans the surface of the sample, usually coated with a thin film of gold. The beam excites electrons on the surface, and these secondary electrons are detected by a device that translates the pattern of electrons into an electronic signal sent to a video screen. The result is an image of the specimen's surface that appears three-dimensional.

The **transmission electron microscope (TEM)** is used to study the internal structure of cells (see Figure 7.3). The TEM aims an electron beam through a very thin section of the specimen, much as a light microscope aims light through a sample on a slide. For the TEM, the specimen has been stained with atoms of heavy metals, which attach to certain cellular structures, thus enhancing the electron density of some parts of the cell more than others. The electrons passing through the specimen are scattered more in the denser regions, so fewer are transmitted. The image displays the pattern of transmitted electrons. Instead of using glass lenses, both the SEM and TEM use electromagnets as lenses to bend the paths of the electrons, ultimately focusing the image onto a monitor for viewing.

Electron microscopes have revealed many subcellular structures that were impossible to resolve with the light microscope. But the light microscope offers advantages, especially in studying living cells. A disadvantage of electron microscopy is that the methods used to prepare the specimen kill the cells. Specimen preparation for any type of microscopy can introduce artifacts, structural features seen in micrographs that do not exist in the living cell.

In the past several decades, light microscopy has been revitalized by major technical advances (see Figure 7.3). Labeling individual cellular molecules or structures with fluorescent markers has made it possible to see such structures with increasing detail. In addition, both confocal and deconvolution microscopy have produced sharper images of three-dimensional tissues and cells. Finally, a group of new techniques and labeling molecules developed in recent years has allowed researchers to “break” the resolution barrier and distinguish subcellular structures even as small as 10–20 nm across. As this *super-resolution microscopy* becomes more widespread, the images we see of living cells are proving as exciting for us as van Leeuwenhoek's were for Robert Hooke 350 years ago.

Microscopes are the most important tools of *cytology*, the study of cell structure. Understanding the function of each structure, however, required the integration of cytology and *biochemistry*, the study of the chemical processes (metabolism) of cells.

Cell Fractionation

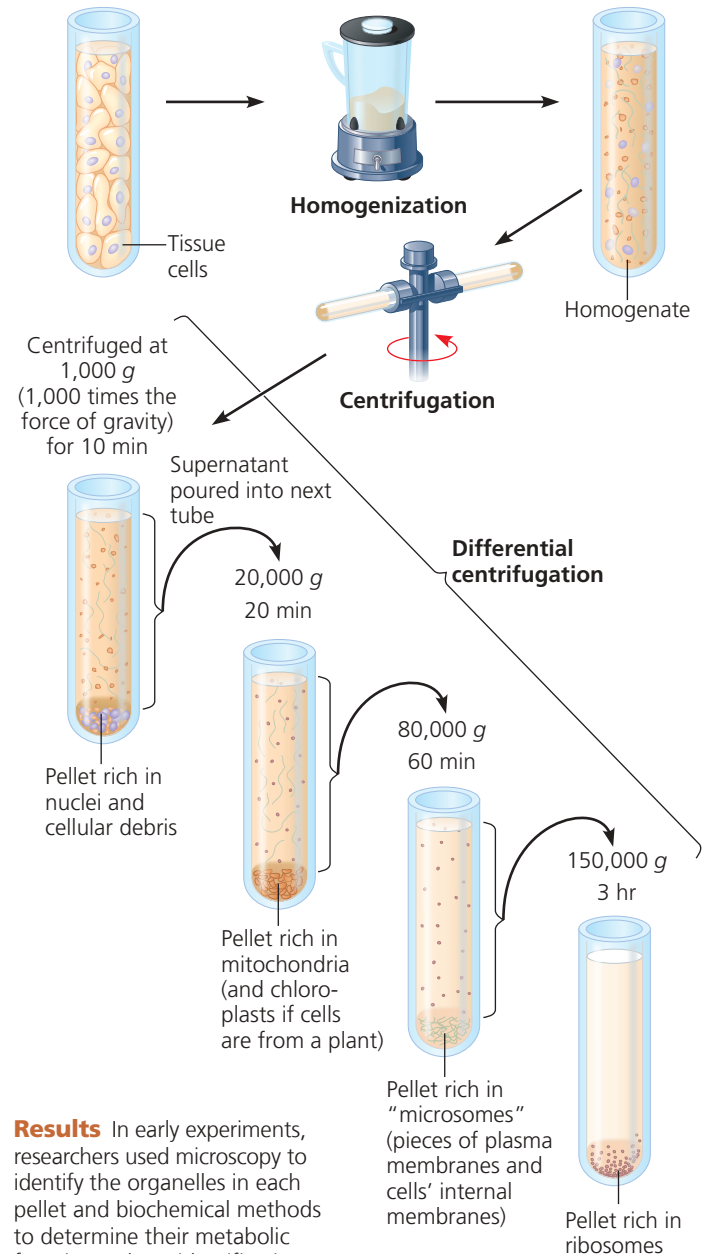
A useful technique for studying cell structure and function is **cell fractionation** (Figure 7.4), which takes cells apart and separates major organelles and other subcellular

▼ Figure 7.4

Research Method Cell Fractionation

Application Cell fractionation is used to separate (fractionate) cell components based on size and density.

Technique Cells are homogenized in a blender to break them up. The resulting mixture (homogenate) is centrifuged. The supernatant (the liquid above the pellet) is poured into another tube and centrifuged at a higher speed for a longer period. This process is repeated several times. This “differential centrifugation” results in a series of pellets, each containing different cell components.



Results In early experiments, researchers used microscopy to identify the organelles in each pellet and biochemical methods to determine their metabolic functions. These identifications established a baseline for this method, enabling today's researchers to know which cell fraction they should collect in order to isolate and study particular organelles.

MAKE CONNECTIONS ► If you wanted to study the process of translation of proteins from mRNA, which part of which fraction would you use? (See Figure 5.22.)

structures from one another. The piece of equipment that is used for this task is the centrifuge, which spins test tubes holding mixtures of disrupted cells at a series of increasing speeds. At each speed, the resulting force causes a subset of the cell components to settle to the bottom of the tube, forming a pellet. At lower speeds, the pellet consists of larger components, and higher speeds result in a pellet with smaller components.

Cell fractionation enables researchers to prepare specific cell components in bulk and identify their functions, a task not usually possible with intact cells. For example, on one of the cell fractions, biochemical tests showed the presence of enzymes involved in cellular respiration, while electron microscopy revealed large numbers of the organelles called mitochondria. Together, these data helped biologists determine that mitochondria are the sites of cellular respiration. Biochemistry and cytology thus complement each other in correlating cell function with structure.

CONCEPT CHECK 7.1

1. How do stains used for light microscopy compare with those used for electron microscopy?
2. **WHAT IF? >** Which type of microscope would you use to study (a) the internal structure of a plant cell and (b) fluorescently labeled nervous tissue?

For suggested answers, see Appendix A.

CONCEPT 7.2

Eukaryotic cells have internal membranes that compartmentalize their functions

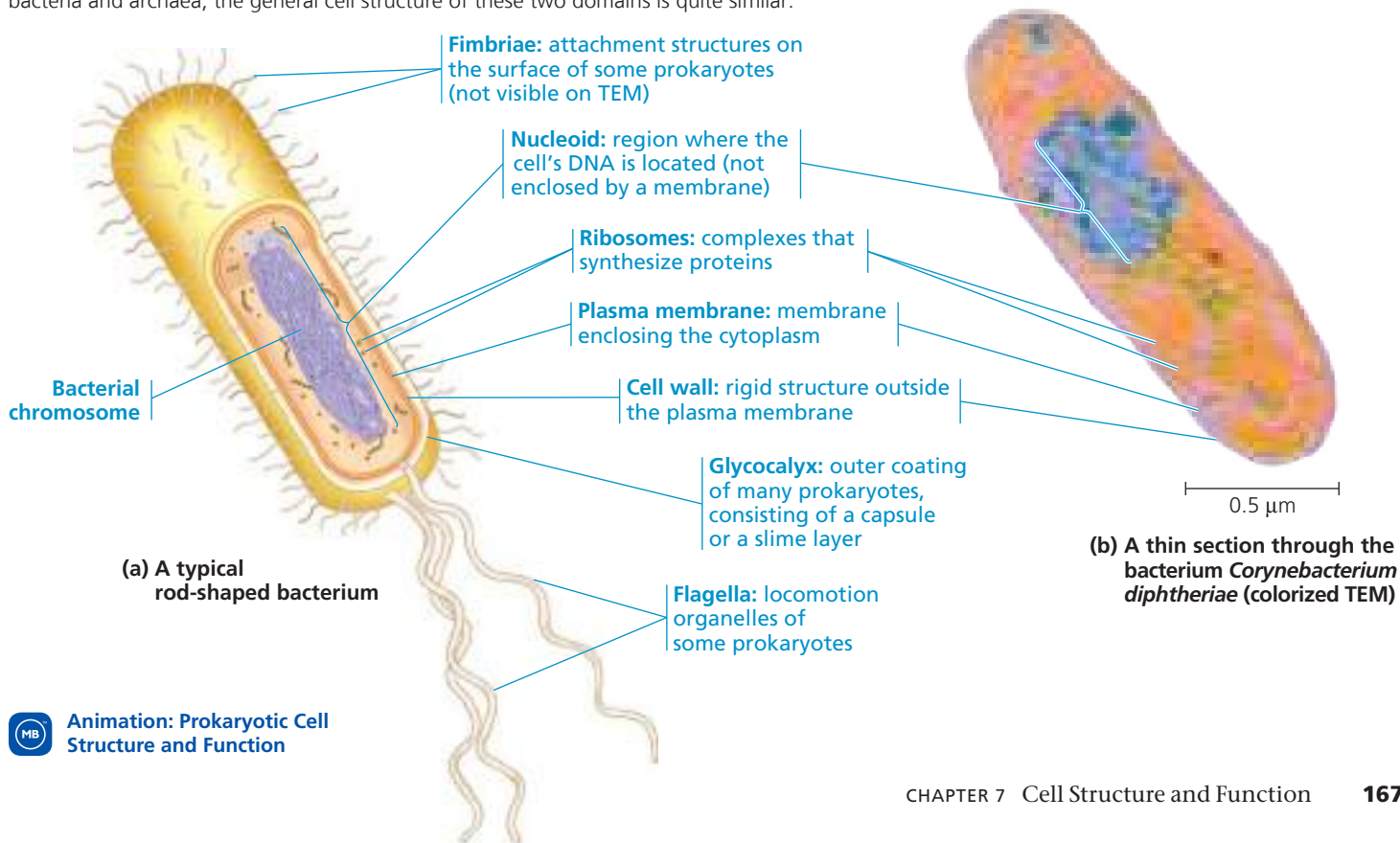
Cells—the basic structural and functional units of every organism—are of two distinct types: prokaryotic and eukaryotic. Organisms of the domains Bacteria and Archaea consist of prokaryotic cells. Protists, fungi, animals, and plants all consist of eukaryotic cells. (“Protist” is an informal term referring to a diverse group of mostly unicellular eukaryotes.)

Comparing Prokaryotic and Eukaryotic Cells

All cells share certain basic features: They are all bounded by a selective barrier, called the *plasma membrane* (also referred to as the cell membrane). Inside all cells is a semifluid, jellylike substance called **cytosol**, in which subcellular components are suspended. All cells contain *chromosomes*, which carry genes in the form of DNA. And all cells have *ribosomes*, tiny complexes that make proteins according to instructions from the genes.

A major difference between prokaryotic and eukaryotic cells is the location of their DNA. In a **eukaryotic cell**, most of the DNA is in an organelle called the *nucleus*, which is bounded by a double membrane (see Figure 7.8). In a **prokaryotic cell**, the DNA is concentrated in a region that is not membrane-enclosed, called the **nucleoid** (Figure 7.5).

▼ Figure 7.5 A prokaryotic cell. Lacking a true nucleus and the other membrane-enclosed organelles of the eukaryotic cell, the prokaryotic cell appears much simpler in internal structure. Prokaryotes include bacteria and archaea; the general cell structure of these two domains is quite similar.



Eukaryotic means “true nucleus” (from the Greek *eu*, true, and *karyon*, kernel, referring to the nucleus), and *prokaryotic* means “before nucleus” (from the Greek *pro*, before), reflecting the earlier evolution of prokaryotic cells.

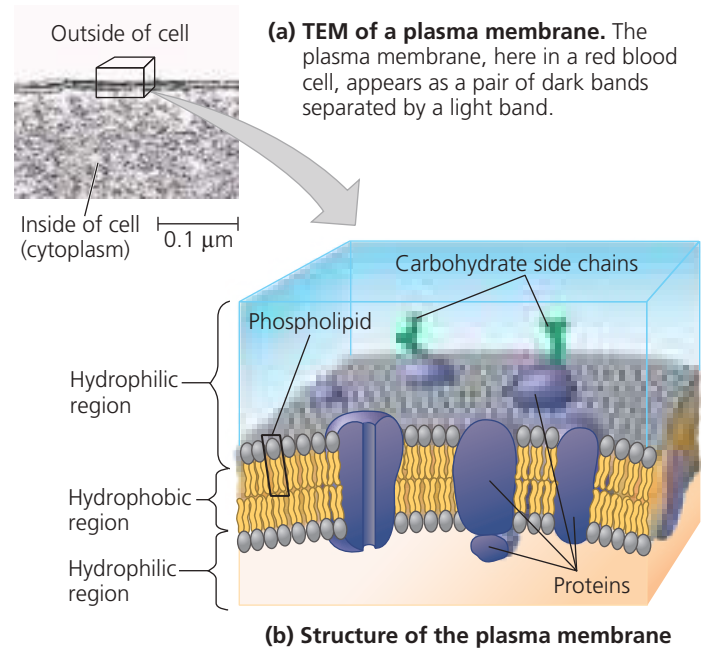
The interior of either type of cell is called the **cytoplasm**; in eukaryotic cells, this term refers only to the region between the nucleus and the plasma membrane. Within the cytoplasm of a eukaryotic cell, suspended in cytosol, are a variety of organelles of specialized form and function. These membrane-bounded structures are absent in almost all prokaryotic cells, another distinction between prokaryotic and eukaryotic cells. In spite of the absence of organelles, though, the prokaryotic cytoplasm is not a formless soup. For example, some prokaryotes contain regions surrounded by proteins (not membranes), within which specific reactions take place.

Eukaryotic cells are generally much larger than prokaryotic cells (see Figure 7.2). Size is a general feature of cell structure that relates to function. The logistics of carrying out cellular metabolism sets limits on cell size. At the lower limit, the smallest cells known are bacteria called mycoplasmas, which have diameters between 0.1 and 1.0 μm . These are perhaps the smallest packages with enough DNA to program metabolism and enough enzymes and other cellular equipment to carry out the activities necessary for a cell to sustain itself and reproduce. Typical bacteria are 1–5 μm in diameter, about ten times the size of mycoplasmas. Eukaryotic cells are typically 10–100 μm in diameter.

Metabolic requirements also impose theoretical upper limits on the size that is practical for a single cell. At the boundary of every cell, the **plasma membrane** functions as a selective barrier that allows passage of enough oxygen, nutrients, and wastes to service the entire cell (Figure 7.6). For each square micrometer of membrane, only a limited amount of a particular substance can cross per second, so the ratio of surface area to volume is critical. As a cell (or any other object) increases in size, its surface area grows proportionately less than its volume. (Area is proportional to a linear dimension squared, whereas volume is proportional to the linear dimension cubed.) Thus, a smaller object has a greater ratio of surface area to volume (Figure 7.7). The **Scientific Skills Exercise** gives you a chance to calculate the volumes and surface areas of two actual cells—a mature yeast cell and a cell budding from it. To see different ways organisms maximize the surface area of cells, see Make Connections Figure 33.9.

The need for a surface area large enough to accommodate the volume helps explain the microscopic size of most cells and the narrow, elongated shapes of others, such as nerve cells. Larger organisms do not generally have *larger* cells than smaller organisms—they simply have *more* cells (see Figure 7.7). A sufficiently high ratio of surface area to volume is especially important in cells that exchange a lot of material with their surroundings, such as intestinal cells. Such cells may have many long, thin projections from their surface called *microvilli*, which increase surface area without an appreciable increase in volume.

▼ **Figure 7.6 The plasma membrane.** The plasma membrane and the membranes of organelles consist of a double layer (bilayer) of phospholipids with various proteins attached to or embedded in it. The hydrophobic parts of phospholipids and membrane proteins are found in the interior of the membrane, while the hydrophilic parts are in contact with aqueous solutions on either side. Carbohydrate side chains may be attached to proteins or lipids on the outer surface of the plasma membrane.

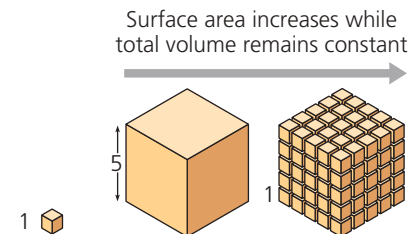


VISUAL SKILLS ► What parts of the membrane diagram in (b) correspond to the dark bands, and which to the light band, in the TEM in (a)? (Review Figure 5.11.)

MB BioFlix® Animation: Membranes

▼ **Figure 7.7 Geometric relationships between surface area and volume.** In this diagram, cells are represented as boxes.

Using arbitrary units of length, we can calculate the cell's surface area (in square units, or units²), volume (in cubic units, or units³), and ratio of surface area to volume. A high surface-to-volume ratio facilitates the exchange of materials between a cell and its environment.



Total surface area [sum of the surface areas (height × width) of all box sides × number of boxes]	6	150	750
Total volume [height × width × length × number of boxes]	1	125	125
Surface-to-volume (S-to-V) ratio [surface area ÷ volume]	6	1.2	6


SCIENTIFIC SKILLS EXERCISE

Using a Scale Bar to Calculate Volume and Surface Area of a Cell

How Much New Cytoplasm and Plasma Membrane Are Made by a Growing Yeast Cell? The unicellular yeast *Saccharomyces cerevisiae* divides by budding off a small new cell that then grows to full size (see the yeast cells at the bottom of Figure 7.8). During its growth, the new cell synthesizes new cytoplasm, which increases its volume, and new plasma membrane, which increases its surface area. In this exercise, you will use a scale bar to determine the sizes of a mature parent yeast cell and a cell budding from it. You will then calculate the volume and surface area of each cell. You will use your calculations to determine how much cytoplasm and plasma membrane the new cell needs to synthesize to grow to full size.

How the Experiment Was Done Yeast cells were grown under conditions that promoted division by budding. The cells were then viewed with a differential interference contrast light microscope and photographed.

Data from the Experiment This light micrograph shows a budding yeast cell about to be released from the mature parent cell:



Micrograph from Kelly Tatchell, using yeast cells grown for experiments described in L. Kozubowski et al., Role of the septin ring in the asymmetric localization of proteins at the mother-bud neck in *Saccharomyces cerevisiae*, *Molecular Biology of the Cell* 16:3455–3466 (2005).

The evolutionary relationships between prokaryotic and eukaryotic cells will be discussed later in this chapter, and prokaryotic cells will be described in detail elsewhere (see Chapter 27). Most of the discussion of cell structure that follows in this chapter applies to eukaryotic cells.

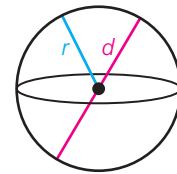
A Panoramic View of the Eukaryotic Cell

In addition to the plasma membrane at its outer surface, a eukaryotic cell has extensive, elaborately arranged internal membranes that divide the cell into compartments—the organelles mentioned earlier. The cell's compartments provide different local environments that support specific metabolic functions, so incompatible processes can occur simultaneously in a single cell. The plasma membrane and organelle membranes also participate directly in the cell's metabolism because many enzymes are built right into the membranes.

INTERPRET THE DATA

1. Examine the micrograph of the yeast cells. The scale bar under the photo is labeled 1 μm . The scale bar works in the same way as a scale on a map, where, for example, 1 inch equals 1 mile. In this case the bar represents one thousandth of a millimeter. Using the scale bar as a basic unit, determine the diameter of the mature parent cell and the new cell. Start by measuring the scale bar and the diameter of each cell. The units you use are irrelevant, but working in millimeters is convenient. Divide each diameter by the length of the scale bar and then multiply by the scale bar's length value to give you the diameter in micrometers.
2. The shape of a yeast cell can be approximated by a sphere. (a) Calculate the volume of each cell using the formula for the volume of a sphere:

$$V = \frac{4}{3}\pi r^3$$



Note that π (the Greek letter pi) is a constant with an approximate value of 3.14, d stands for diameter, and r stands for radius, which is half the diameter. (b) What volume of new cytoplasm will the new cell have to synthesize as it matures? To determine this, calculate the difference between the volume of the full-sized cell and the volume of the new cell.

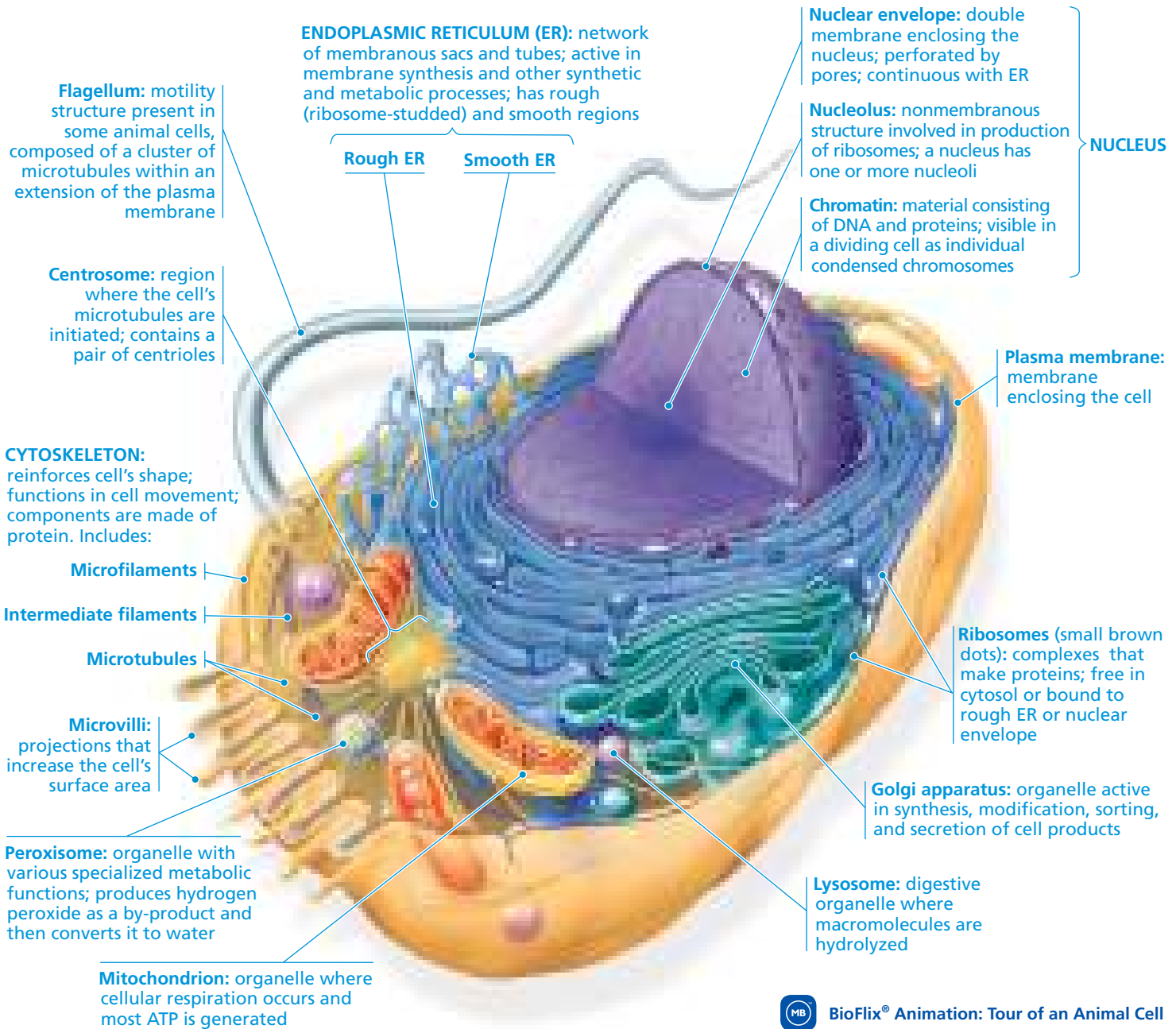
3. As the new cell grows, its plasma membrane needs to expand to contain the increased volume of the cell. (a) Calculate the surface area of each cell using the formula for the surface area of a sphere: $A = 4\pi r^2$. (b) How much area of new plasma membrane will the new cell have to synthesize as it matures?
4. When the new cell matures, it will be approximately how many times greater in volume and how many times greater in surface area than its current size?

Instructors: A version of this Scientific Skills Exercise can be assigned in MasteringBiology.

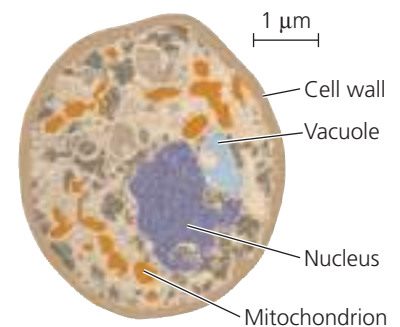
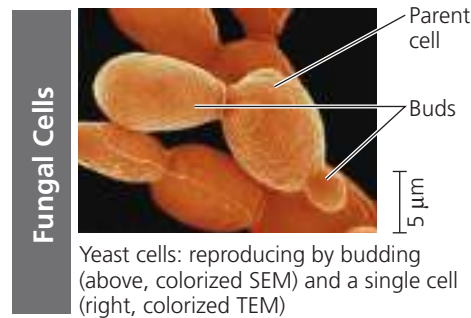
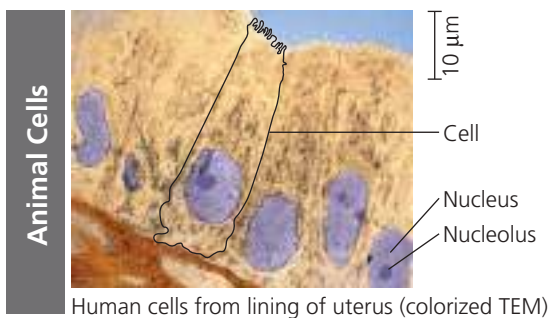
The basic fabric of most biological membranes is a double layer of phospholipids and other lipids. Embedded in this lipid bilayer or attached to its surfaces are diverse proteins (see Figure 7.6). However, each type of membrane has a unique composition of lipids and proteins suited to that membrane's specific functions. For example, enzymes embedded in the membranes of the organelles called mitochondria function in cellular respiration. Because membranes are so fundamental to the organization of the cell, Chapter 8 will discuss them in detail.

Before continuing with this chapter, examine the eukaryotic cells in **Figure 7.8**. The generalized diagrams of an animal cell and a plant cell introduce the various organelles and show the key differences between animal and plant cells. The micrographs at the bottom of the figure give you a glimpse of cells from different types of eukaryotic organisms.

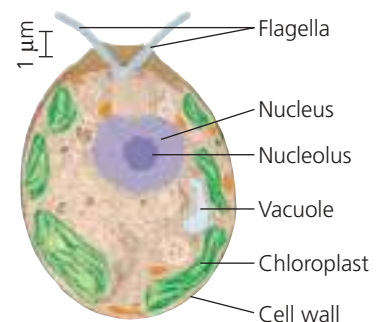
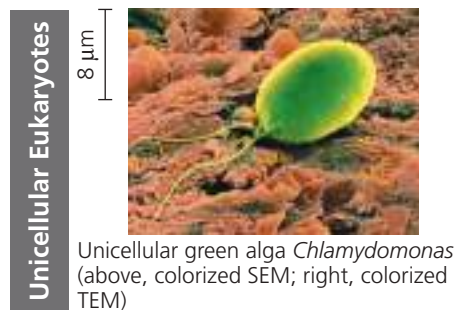
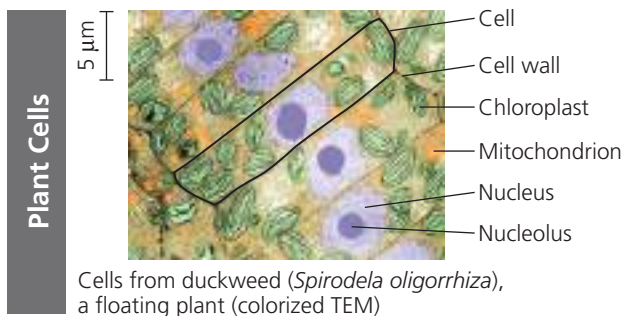
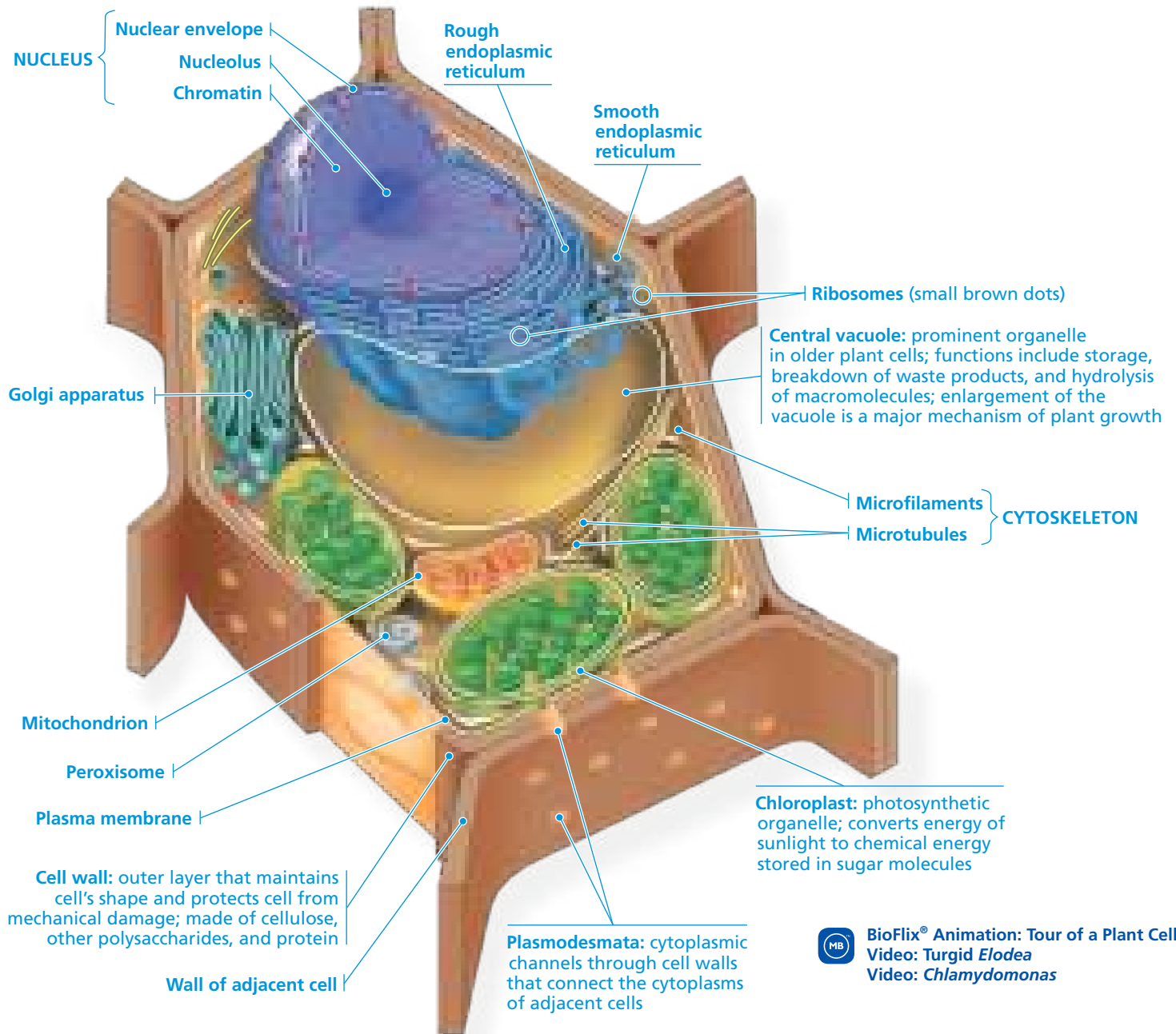
Animal Cell (cutaway view of generalized cell)



BioFlix® Animation: Tour of an Animal Cell



Plant Cell (cutaway view of generalized cell)



CONCEPT CHECK 7.2

1. Briefly describe the structure and function of the nucleus, the mitochondrion, the chloroplast, and the endoplasmic reticulum.
2. **DRAW IT** ▶ Draw a simplified elongated cell that measures $125 \times 1 \times 1$ arbitrary units. A nerve cell would be roughly this shape. Predict how its surface-to-volume ratio would compare with those in Figure 7.7. Then calculate the ratio and check your prediction.

For suggested answers, see Appendix A.

CONCEPT 7.3

The eukaryotic cell's genetic instructions are housed in the nucleus and carried out by the ribosomes

On the first stop of our detailed tour of the eukaryotic cell, let's look at two cellular components involved in the genetic control of the cell: the nucleus, which houses most of the cell's DNA, and the ribosomes, which use information from the DNA to make proteins.

The Nucleus: Information Central

The **nucleus** contains most of the genes in the eukaryotic cell. (Some genes are located in mitochondria and chloroplasts.) It is usually the most conspicuous organelle (see the purple structure in the fluorescence micrograph), averaging about $5 \mu\text{m}$ in diameter. The **nuclear envelope** encloses the nucleus (Figure 7.9), separating its contents from the cytoplasm.

The nuclear envelope is a *double* membrane. The two membranes, each a lipid bilayer with associated proteins, are separated by a space of 20–40 nm. The envelope is perforated by pore structures that are about 100 nm in diameter. At the lip of each pore, the inner and outer membranes of the nuclear envelope are continuous. An intricate protein structure called a *pore complex* lines each pore and plays an important role in the cell by regulating the entry and exit of proteins and RNAs, as well as large complexes of macromolecules. Except at the pores, the nuclear side of the envelope is lined by the **nuclear lamina**, a netlike array of protein filaments (in animal cells, called *intermediate filaments*) that maintains the shape of the nucleus by mechanically supporting the nuclear envelope. There is also much evidence for a *nuclear matrix*, a framework of protein fibers extending throughout the nuclear interior. The nuclear lamina and matrix may help organize the genetic material so it functions efficiently.

Within the nucleus, the DNA is organized into discrete units called **chromosomes**, structures that carry the genetic information. Each chromosome contains one long DNA molecule

associated with many proteins. Some of the proteins help coil the DNA molecule of each chromosome, reducing its length and allowing it to fit into the nucleus. The complex of DNA and proteins making up chromosomes is called **chromatin**. When a cell is not dividing, stained chromatin appears as a diffuse mass in micrographs, and the chromosomes cannot be distinguished from one another, even though discrete chromosomes are present. As a cell prepares to divide, however, the chromosomes coil (condense) further, becoming thick enough to be distinguished under a microscope as separate structures. Each eukaryotic species has a characteristic number of chromosomes. For example, a typical human cell has 46 chromosomes in its nucleus; the exceptions are the sex cells (eggs and sperm), which have only 23 chromosomes in humans. A fruit fly cell has 8 chromosomes in most cells and 4 in the sex cells.

A prominent structure within the nondividing nucleus is the **nucleolus** (plural, *nucleoli*), which appears through the electron microscope as a mass of densely stained granules and fibers adjoining part of the chromatin. Here a type of RNA called *ribosomal RNA* (rRNA) is synthesized from instructions in the DNA. Also in the nucleolus, proteins imported from the cytoplasm are assembled with rRNA into large and small subunits of ribosomes. These subunits then exit the nucleus through the nuclear pores to the cytoplasm, where a large and a small subunit can assemble into a ribosome. Sometimes there are two or more nucleoli; the number depends on the species and the stage in the cell's reproductive cycle.

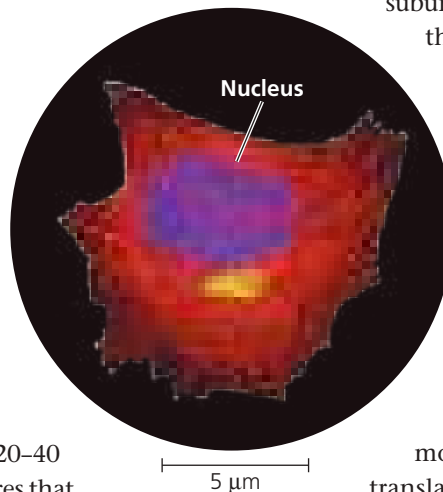
As we saw in Figure 5.22, the nucleus directs protein synthesis by synthesizing messenger RNA (mRNA) according to instructions provided by the DNA. The mRNA is then transported to the cytoplasm via the nuclear pores. Once an mRNA molecule reaches the cytoplasm, ribosomes translate the mRNA's genetic message into the primary structure of a specific polypeptide. (This process of transcribing and translating genetic information is described in detail in Chapter 17.)



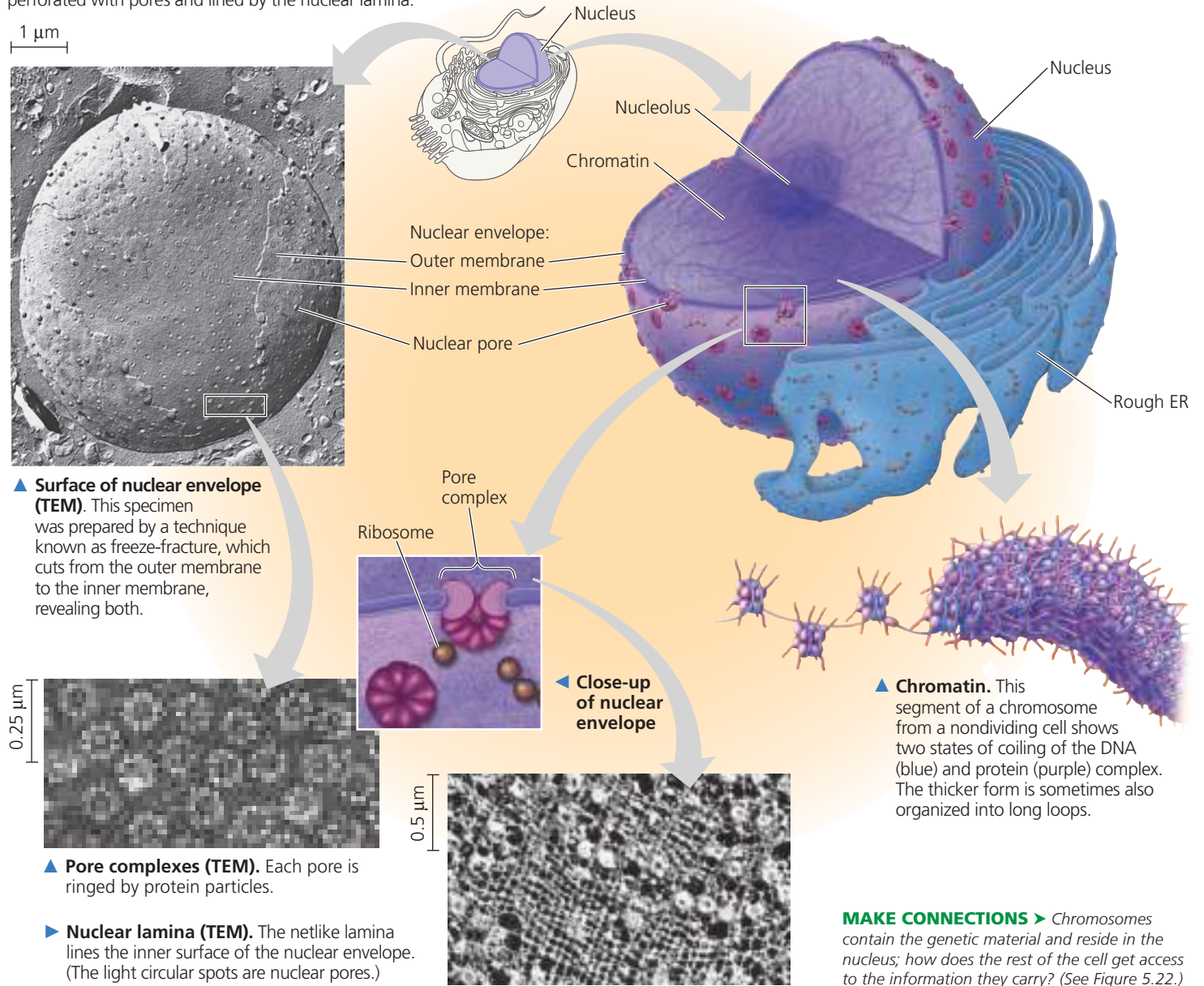
BioFlix® Animation: Nucleus and Ribosomes

Ribosomes: Protein Factories

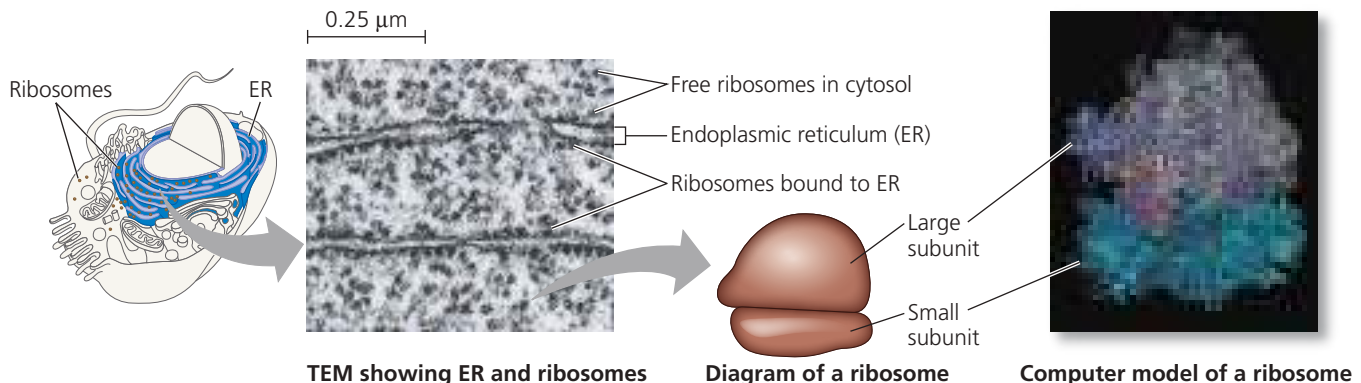
Ribosomes, which are complexes made of ribosomal RNAs and proteins, are the cellular components that carry out protein synthesis (Figure 7.10). (Note that ribosomes are not membrane bounded and thus are not considered organelles.) Cells that have high rates of protein synthesis have particularly large numbers of ribosomes as well as prominent nucleoli, which makes sense, given the role of nucleoli in ribosome assembly. For example, a human pancreas cell, which makes many digestive enzymes, has a few million ribosomes.



▼ **Figure 7.9 The nucleus and its envelope.** Within the nucleus are the chromosomes, which appear as a mass of chromatin (DNA and associated proteins) and one or more nucleoli (singular, *nucleolus*), which function in ribosome synthesis. The nuclear envelope, which consists of two membranes separated by a narrow space, is perforated with pores and lined by the nuclear lamina.



▼ **Figure 7.10 Ribosomes.** This electron micrograph of a pancreas cell shows both free and bound ribosomes. The simplified diagram and computer model show the two subunits of a ribosome.



DRAW IT ▶ After you have read the section on ribosomes, circle a ribosome in the micrograph that might be making a protein that will be secreted.

Interview with Venki Ramakrishnan: Studying ribosome structure

Ribosomes build proteins in two cytoplasmic locales. At any given time, *free ribosomes* are suspended in the cytosol, while *bound ribosomes* are attached to the outside of the endoplasmic reticulum or nuclear envelope (see Figure 7.10). Bound and free ribosomes are structurally identical, and ribosomes can play either role at different times. Most of the proteins made on free ribosomes function within the cytosol; examples are enzymes that catalyze the first steps of sugar breakdown. Bound ribosomes generally make proteins that are destined for insertion into membranes, for packaging within certain organelles such as lysosomes (see Figure 7.8), or for export from the cell (secretion). Cells that specialize in protein secretion—for instance, the cells of the pancreas that secrete digestive enzymes—frequently have a high proportion of bound ribosomes. (You will learn more about ribosome structure and function in Concept 17.4.)

CONCEPT CHECK 7.3

1. What role do ribosomes play in carrying out genetic instructions?
2. Describe the molecular composition of nucleoli and explain their function.
3. **WHAT IF? >** As a cell begins the process of dividing, its chromosomes become shorter, thicker, and individually visible in an LM (light micrograph). Explain what is happening at the molecular level.

For suggested answers, see Appendix A.

CONCEPT 7.4

The endomembrane system regulates protein traffic and performs metabolic functions

Many of the different membrane-bounded organelles of the eukaryotic cell are part of the **endomembrane system**, which includes the nuclear envelope, the endoplasmic reticulum, the Golgi apparatus, lysosomes, various kinds of vesicles and vacuoles, and the plasma membrane. This system carries out a variety of tasks in the cell, including synthesis of proteins, transport of proteins into membranes and organelles or out of the cell, metabolism and movement of lipids, and detoxification of poisons. The membranes of this system are related either through direct physical continuity or by the transfer of membrane segments as tiny **vesicles** (sacs made of membrane). Despite these relationships, the various membranes are not identical in structure and function. Moreover, the thickness, molecular composition, and types of chemical reactions carried out in a given membrane are not fixed, but may be modified several times during the membrane's life. Having already discussed the nuclear envelope, we will now focus on the endoplasmic reticulum and the other endomembranes to which the endoplasmic reticulum gives rise.

The Endoplasmic Reticulum: Biosynthetic Factory

The **endoplasmic reticulum (ER)** is such an extensive network of membranes that it accounts for more than half the total membrane in many eukaryotic cells. (The word *endoplasmic* means “within the cytoplasm,” and *reticulum* is Latin for “little net.”) The ER consists of a network of membranous tubules and sacs called cisternae (from the Latin *cisterna*, a reservoir for a liquid). The ER membrane separates the internal compartment of the ER, called the *ER lumen* (cavity) or cisternal space, from the cytosol. And because the ER membrane is continuous with the nuclear envelope, the space between the two membranes of the envelope is continuous with the lumen of the ER (**Figure 7.11**).

There are two distinct, though connected, regions of the ER that differ in structure and function: smooth ER and rough ER. **Smooth ER** is so named because its outer surface lacks ribosomes. **Rough ER** is studded with ribosomes on the outer surface of the membrane and thus appears rough through the electron microscope. As already mentioned, ribosomes are also attached to the cytoplasmic side of the nuclear envelope's outer membrane, which is continuous with rough ER.

Functions of Smooth ER

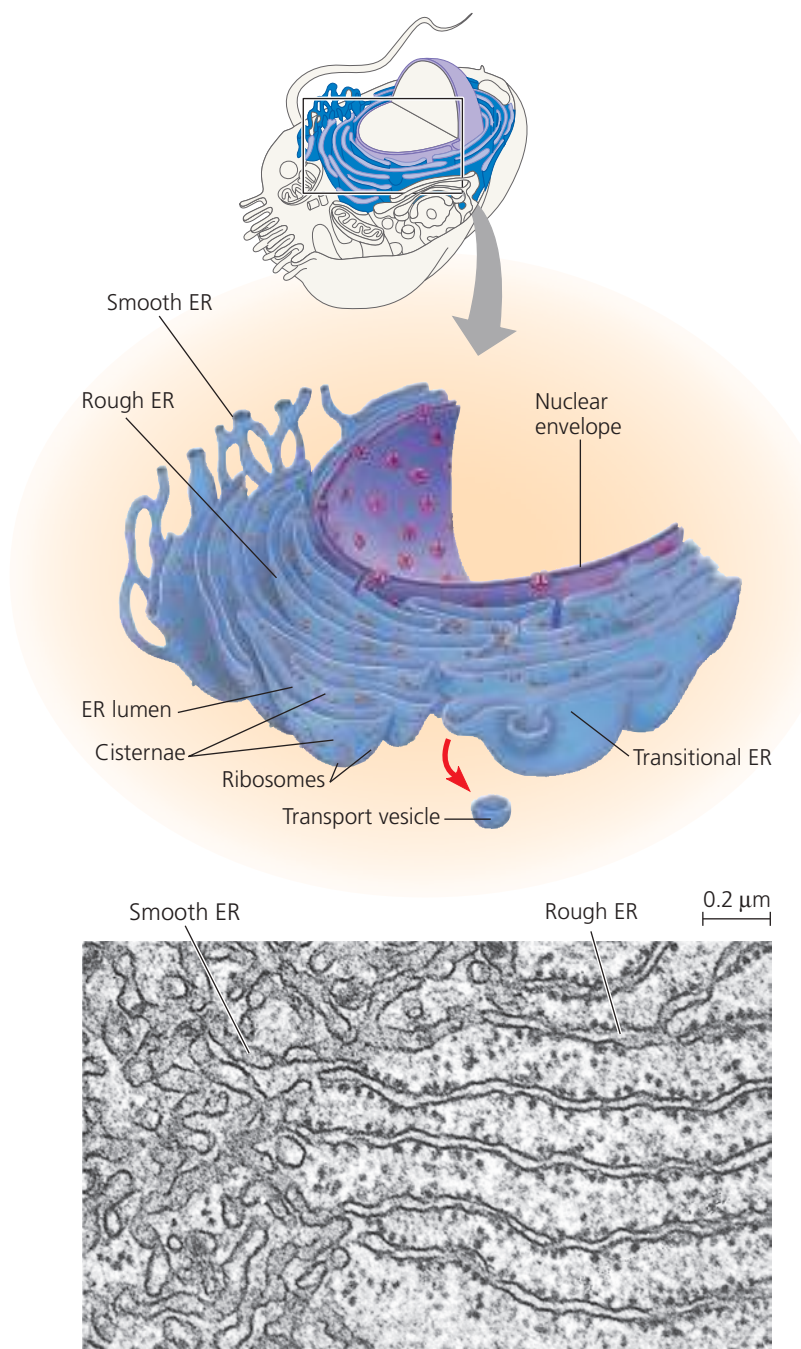
The smooth ER functions in diverse metabolic processes, which vary with cell type. These processes include synthesis of lipids, metabolism of carbohydrates, detoxification of drugs and poisons, and storage of calcium ions.

Enzymes of the smooth ER are important in the synthesis of lipids, including oils, steroids, and new membrane phospholipids. Among the steroids produced by the smooth ER in animal cells are the sex hormones of vertebrates and the various steroid hormones secreted by the adrenal glands. The cells that synthesize and secrete these hormones—in the testes and ovaries, for example—are rich in smooth ER, a structural feature that fits the function of these cells.

Other enzymes of the smooth ER help detoxify drugs and poisons, especially in liver cells. Detoxification usually involves adding hydroxyl groups to drug molecules, making them more soluble and easier to flush from the body. The sedative phenobarbital and other barbiturates are examples of drugs metabolized in this manner by smooth ER in liver cells. In fact, barbiturates, alcohol, and many other drugs induce the proliferation of smooth ER and its associated detoxification enzymes, thus increasing the rate of detoxification. This, in turn, increases tolerance to the drugs, meaning that higher doses are required to achieve a particular effect, such as sedation. Also, because some of the detoxification enzymes have relatively broad action,

the proliferation of smooth ER in response to one drug can increase the need for higher dosages of other drugs as well. Barbiturate abuse, for example, can decrease the effectiveness of certain antibiotics and other useful drugs.

▼ **Figure 7.11 Endoplasmic reticulum (ER).** A membranous system of interconnected tubules and flattened sacs called cisternae, the ER is also continuous with the nuclear envelope, as shown in the cutaway diagram at the top. The membrane of the ER encloses a continuous compartment called the ER lumen (or cisternal space). Rough ER, which is studded on its outer surface with ribosomes, can be distinguished from smooth ER in the electron micrograph (TEM). Transport vesicles bud off from a region of the rough ER called transitional ER and travel to the Golgi apparatus and other destinations.



The smooth ER also stores calcium ions. In muscle cells, for example, the smooth ER membrane pumps calcium ions from the cytosol into the ER lumen. When a muscle cell is stimulated by a nerve impulse, calcium ions rush back across the ER membrane into the cytosol and trigger contraction of the muscle cell. In other cell types, release of calcium ions from the smooth ER triggers different responses, such as secretion of vesicles carrying newly synthesized proteins.

Functions of Rough ER

Many cells secrete proteins that are produced by ribosomes attached to rough ER. For example, certain pancreatic cells synthesize the protein insulin in the ER and secrete this hormone into the bloodstream. As a polypeptide chain grows from a bound ribosome, the chain is threaded into the ER lumen through a pore formed by a protein complex in the ER membrane. The new polypeptide folds into its functional shape as it enters the ER lumen. Most secretory proteins are **glycoproteins**, proteins with carbohydrates covalently bonded to them. The carbohydrates are attached to the proteins in the ER lumen by enzymes built into the ER membrane.

After secretory proteins are formed, the ER membrane keeps them separate from proteins in the cytosol, which are produced by free ribosomes. Secretory proteins depart from the ER wrapped in the membranes of vesicles that bud like bubbles from a specialized region called transitional ER (see Figure 7.11). Vesicles in transit from one part of the cell to another are called **transport vesicles**; we will discuss their fate shortly.

In addition to making secretory proteins, rough ER is a membrane factory for the cell; it grows in place by adding membrane proteins and phospholipids to its own membrane. As polypeptides destined to be membrane proteins grow from the ribosomes, they are inserted into the ER membrane itself and anchored there by their hydrophobic portions. Like the smooth ER, the rough ER also makes membrane phospholipids; enzymes built into the ER membrane assemble phospholipids from precursors in the cytosol. The ER membrane expands, and portions of it are transferred in the form of transport vesicles to other components of the endomembrane system.

The Golgi Apparatus: Shipping and Receiving Center

After leaving the ER, many transport vesicles travel to the **Golgi apparatus**. We can think of the Golgi as a warehouse for receiving, sorting, shipping, and even some manufacturing. Here, products of the ER, such as proteins, are modified and stored and then sent to other destinations. Not surprisingly, the Golgi apparatus is especially extensive in cells specialized for secretion.

The Golgi apparatus consists of a group of associated, flattened membranous sacs—cisternae—looking like a stack of pita bread (**Figure 7.12**). A cell may have many, even hundreds, of these stacks. The membrane of each cisterna in a stack separates its internal space from the cytosol. Vesicles concentrated in the vicinity of the Golgi apparatus are engaged in the transfer of material between parts of the Golgi and other structures.

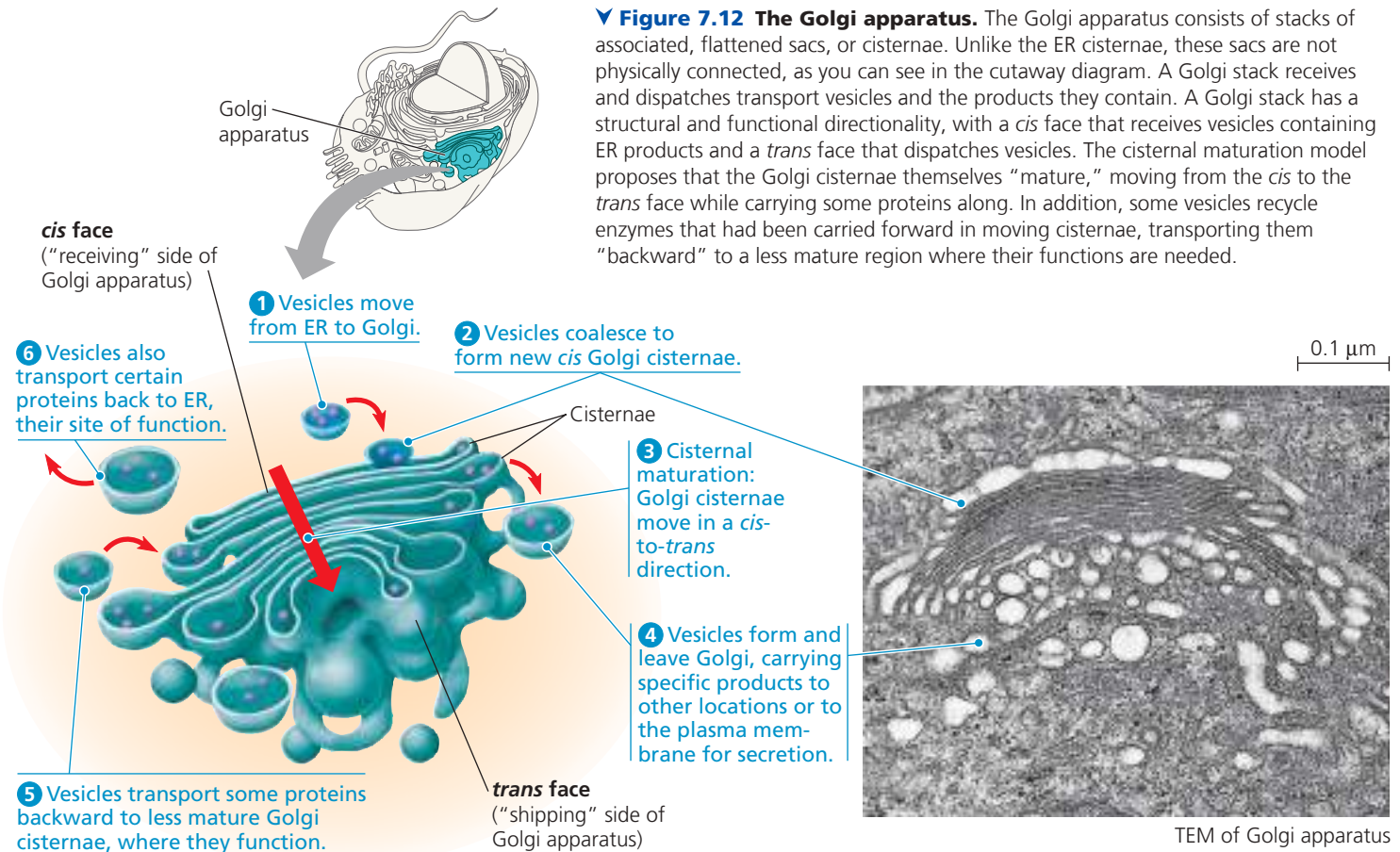
A Golgi stack has a distinct structural directionality, with the membranes of cisternae on opposite sides of the stack differing in thickness and molecular composition. The two sides of a Golgi stack are referred to as the *cis* face and the *trans* face; these act, respectively, as the receiving and shipping departments of the Golgi apparatus. The term *cis* means “on the same side,” and the *cis* face is usually located near the ER. Transport vesicles move material from the ER to the Golgi apparatus. A vesicle that buds from the ER can add its membrane and the contents of its lumen to the *cis* face by fusing with a Golgi membrane on that side. The *trans* face (“on the opposite side”) gives rise to vesicles that pinch off and travel to other sites.

Products of the endoplasmic reticulum are usually modified during their transit from the *cis* region to the *trans* region of the Golgi apparatus. For example, glycoproteins formed in the ER have their carbohydrates modified, first in the ER itself, and then as they pass through the Golgi. The Golgi

removes some sugar monomers and substitutes others, producing a large variety of carbohydrates. Membrane phospholipids may also be altered in the Golgi.

In addition to its finishing work, the Golgi apparatus also manufactures some macromolecules. Many polysaccharides secreted by cells are Golgi products. For example, pectins and certain other noncellulose polysaccharides are made in the Golgi of plant cells and then incorporated along with cellulose into their cell walls. Like secretory proteins, nonprotein Golgi products that will be secreted depart from the *trans* face of the Golgi inside transport vesicles that eventually fuse with the plasma membrane.

The Golgi manufactures and refines its products in stages, with different cisternae containing unique teams of enzymes. Until recently, biologists viewed the Golgi as a static structure, with products in various stages of processing transferred from one cisterna to the next by vesicles. While this may occur, research from several labs has given rise to a new model of the Golgi as a more dynamic structure. According to the *cisternal maturation model*, the cisternae of the Golgi actually progress forward from the *cis* to the *trans* face, carrying and modifying their cargo as they move. Figure 7.12 shows the details of this model. The reality probably lies somewhere between the two models; recent research suggests the central regions of the cisternae may remain in place, while the outer ends are more dynamic.



Before a Golgi stack dispatches its products by budding vesicles from the *trans* face, it sorts these products and targets them for various parts of the cell. Molecular identification tags, such as phosphate groups added to the Golgi products, aid in sorting by acting like zip codes on mailing labels. Finally, transport vesicles budded from the Golgi may have external molecules on their membranes that recognize “docking sites” on the surface of specific organelles or on the plasma membrane, thus targeting the vesicles appropriately.

Lysosomes: Digestive Compartments

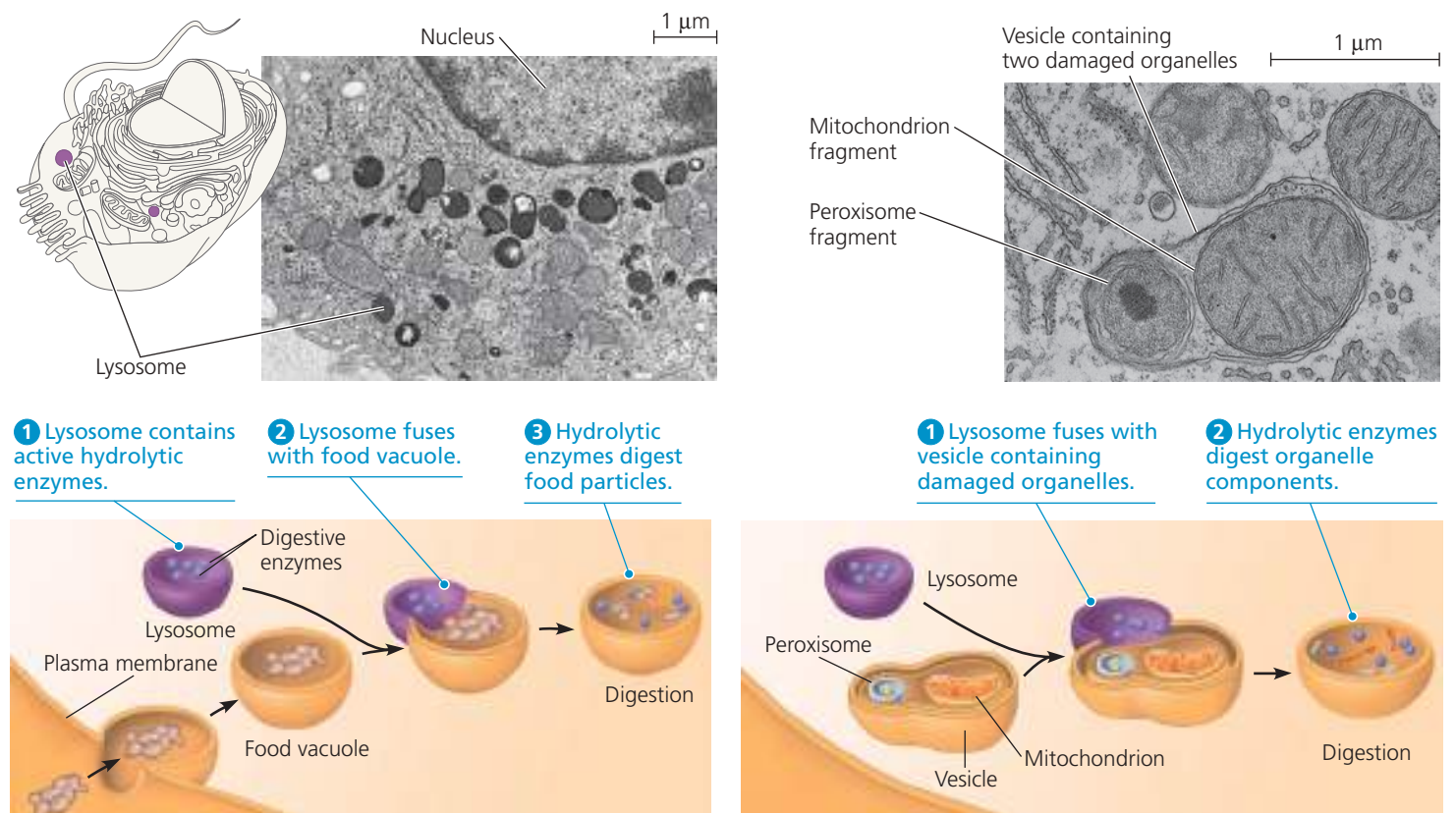
A **lysosome** is a membranous sac of hydrolytic enzymes that many eukaryotic cells use to digest (hydrolyze) macromolecules. Lysosomal enzymes work best in the acidic environment found in lysosomes. If a lysosome breaks open or leaks its contents, the released enzymes are not very active because the cytosol has a near-neutral pH. However, excessive leakage from a large number of lysosomes can destroy a cell by self-digestion.

Hydrolytic enzymes and lysosomal membrane are made by rough ER and then transferred to the Golgi apparatus for

further processing. At least some lysosomes probably arise by budding from the *trans* face of the Golgi apparatus (see Figure 7.12). How are the proteins of the inner surface of the lysosomal membrane and the digestive enzymes themselves spared from destruction? Apparently, the three-dimensional shapes of these proteins protect vulnerable bonds from enzymatic attack.

Lysosomes carry out intracellular digestion in a variety of circumstances. Amoebas and many other unicellular eukaryotes eat by engulfing smaller organisms or food particles, a process called **phagocytosis** (from the Greek *phagein*, to eat, and *kytos*, vessel, referring here to the cell). The *food vacuole* formed in this way then fuses with a lysosome, whose enzymes digest the food (Figure 7.13a, bottom). Digestion products, including simple sugars, amino acids, and other monomers, pass into the cytosol and become nutrients for the cell. Some human cells also carry out phagocytosis. Among them are macrophages, a type of white blood cell that helps defend the body by engulfing and destroying bacteria and other invaders (see Figure 7.13a, top, and Figure 7.31).

▼ **Figure 7.13 Lysosomes.**



(a) Phagocytosis. In phagocytosis, lysosomes digest (hydrolyze) materials taken into the cell. *Top:* In this macrophage (a type of white blood cell) from a rat, the lysosomes are very dark because of a stain that reacts with one of the products of digestion inside the lysosome (TEM). Macrophages ingest bacteria and viruses and destroy them using lysosomes. *Bottom:* This diagram shows a lysosome fusing with a food vacuole during the process of phagocytosis by a unicellular eukaryote.

(b) Autophagy. In autophagy, lysosomes recycle intracellular materials. *Top:* In the cytoplasm of this rat liver cell is a vesicle containing two disabled organelles (TEM). The vesicle will fuse with a lysosome in the process of autophagy, which recycles intracellular materials. *Bottom:* This diagram shows fusion of such a vesicle with a lysosome. This type of vesicle has a double membrane of unknown origin. The outer membrane fuses with the lysosome, and the inner membrane is degraded along with the damaged organelles.

Lysosomes also use their hydrolytic enzymes to recycle the cell's own organic material, a process called *autophagy*. During autophagy, a damaged organelle or small amount of cytosol becomes surrounded by a double membrane (of unknown origin), and a lysosome fuses with the outer membrane of this vesicle (Figure 7.13b). The lysosomal enzymes dismantle the inner membrane with the enclosed material, and the resulting small organic compounds are released to the cytosol for reuse. With the help of lysosomes, the cell continually renews itself. A human liver cell, for example, recycles half of its macromolecules each week.

The cells of people with inherited lysosomal storage diseases lack a functioning hydrolytic enzyme normally present in lysosomes. The lysosomes become engorged with indigestible material, which begins to interfere with other cellular activities. In Tay-Sachs disease, for example, a lipid-digesting enzyme is missing or inactive, and the brain becomes impaired by an accumulation of lipids in the cells. Fortunately, lysosomal storage diseases are rare in the general population.

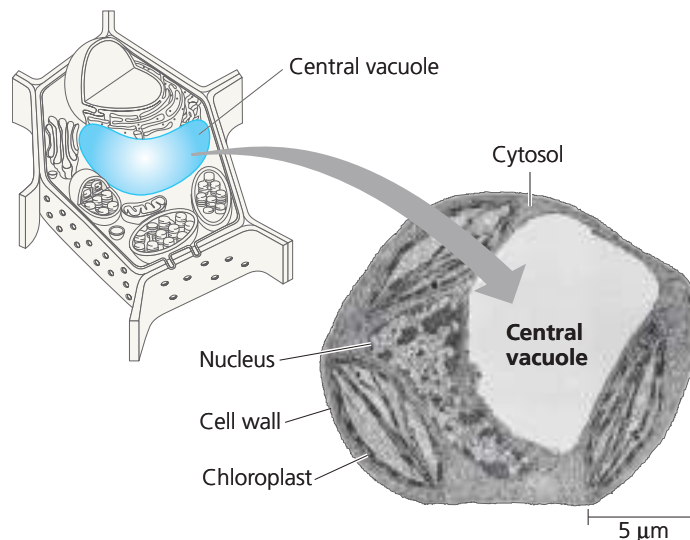
Vacuoles: Diverse Maintenance Compartments

Vacuoles are large vesicles derived from the endoplasmic reticulum and Golgi apparatus. Thus, vacuoles are an integral part of a cell's endomembrane system. Like all cellular membranes, the vacuolar membrane is selective in transporting solutes; as a result, the solution inside a vacuole differs in composition from the cytosol.

Vacuoles perform a variety of functions in different kinds of cells. **Food vacuoles**, formed by phagocytosis, have already been mentioned (see Figure 7.13a). Many unicellular eukaryotes living in fresh water have **contractile vacuoles** that pump excess water out of the cell, thereby maintaining a suitable concentration of ions and molecules inside the cell (see Figure 8.13). In plants and fungi, certain vacuoles carry out enzymatic hydrolysis, a function shared by lysosomes in animal cells. (In fact, some biologists consider these hydrolytic vacuoles to be a type of lysosome.) In plants, small vacuoles can hold reserves of important organic compounds, such as the proteins stockpiled in the storage cells in seeds. Vacuoles may also help protect the plant against herbivores by storing compounds that are poisonous or unpalatable to animals. Some plant vacuoles contain pigments, such as the red and blue pigments of petals that help attract pollinating insects to flowers.

Mature plant cells generally contain a large **central vacuole** (Figure 7.14), which develops by the coalescence of smaller vacuoles. The solution inside the central vacuole, called cell sap, is the plant cell's main repository of inorganic ions, including potassium and chloride. The central vacuole plays a major role in the growth of plant cells, which enlarge

▼ **Figure 7.14 The plant cell vacuole.** The central vacuole is usually the largest compartment in a plant cell; the rest of the cytoplasm is often confined to a narrow zone between the vacuolar membrane and the plasma membrane (TEM).



BioFlix® Animation: Central Vacuole

as the vacuole absorbs water, enabling the cell to become larger with a minimal investment in new cytoplasm. The cytosol often occupies only a thin layer between the central vacuole and the plasma membrane, so the ratio of plasma membrane surface to cytosolic volume is sufficient, even for a large plant cell.

The Endomembrane System: A Review

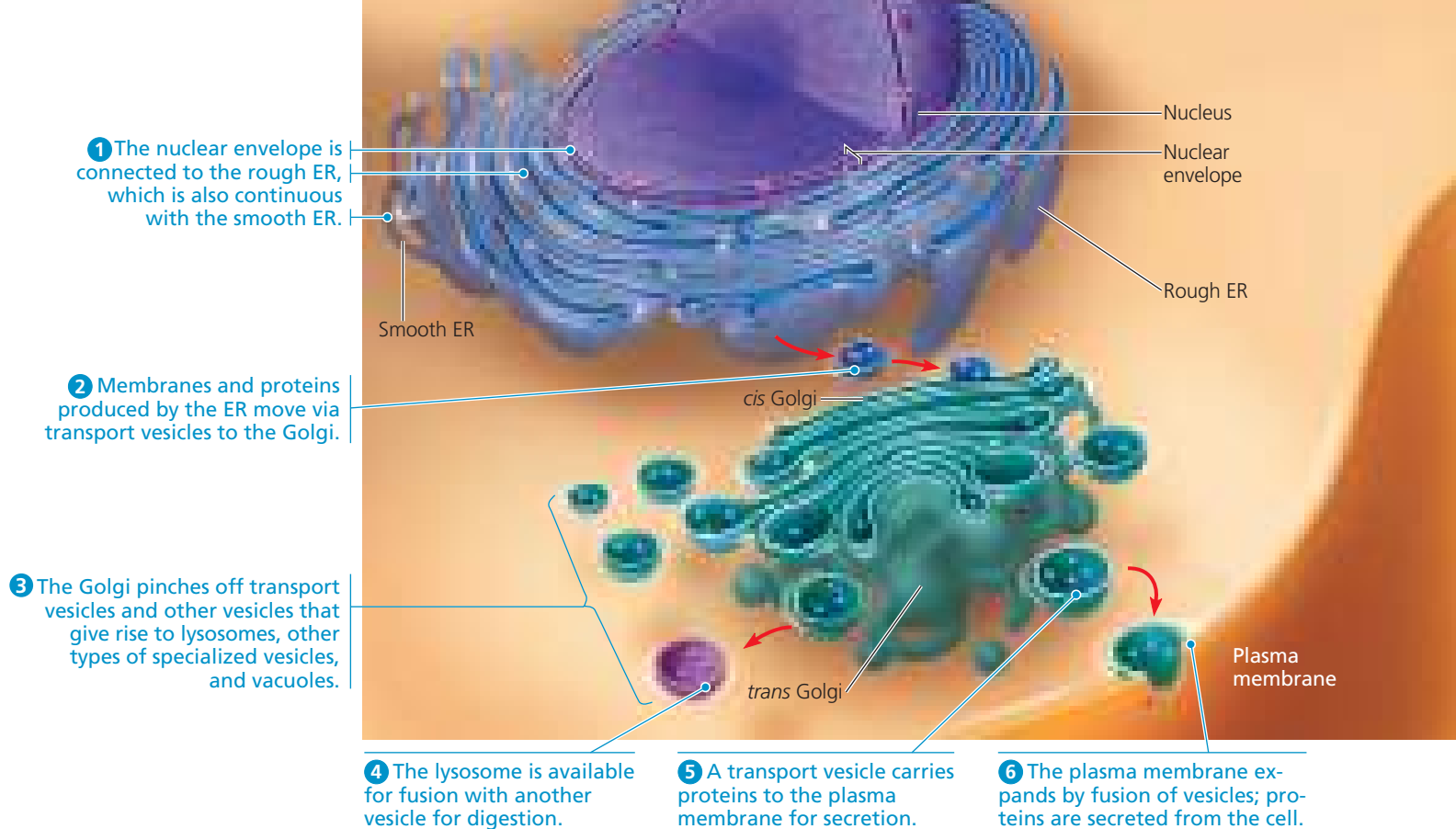
Figure 7.15 reviews the endomembrane system, showing the flow of membrane lipids and proteins through the various organelles. As the membrane moves from the ER to the Golgi and then elsewhere, its molecular composition and metabolic functions are modified, along with those of its contents. The endomembrane system is a complex and dynamic player in the cell's compartmental organization.

We'll continue our tour of the cell with some organelles that are not closely related to the endomembrane system but play crucial roles in the energy transformations carried out by cells.

CONCEPT CHECK 7.4

1. Describe the structural and functional distinctions between rough and smooth ER.
2. If a lysosome leaks enzymes, will a cell get destroyed by self-digestion? Explain.
3. **WHAT IF? >** Imagine a protein that functions in the ER but requires modification in the Golgi apparatus before it can achieve that function. Describe the protein's path through the cell, starting with the mRNA molecule that specifies the protein.

For suggested answers, see Appendix A.



▲ **Figure 7.15 Review: relationships among organelles of the endomembrane system.** The red arrows show some of the migration pathways for membranes and the materials they enclose.

 **BioFlix® Animation: Endomembrane System**

CONCEPT 7.5

Mitochondria and chloroplasts change energy from one form to another

Organisms transform the energy they acquire from their surroundings. In eukaryotic cells, mitochondria and chloroplasts are the organelles that convert energy to forms that cells can use for work. **Mitochondria** (singular, *mitochondrion*) are the sites of cellular respiration, the metabolic process that uses oxygen to drive the generation of ATP by extracting energy from sugars, fats, and other fuels. **Chloroplasts**, found in plants and algae, are the sites of photosynthesis. This process in chloroplasts converts solar energy to chemical energy by absorbing sunlight and using it to drive the synthesis of organic compounds such as sugars from carbon dioxide and water.

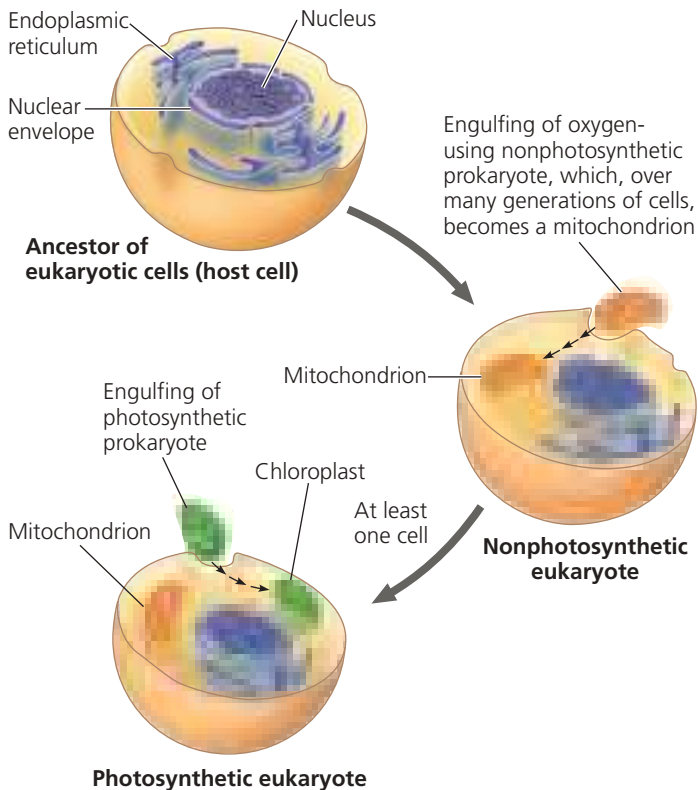
In addition to having related functions, mitochondria and chloroplasts share similar evolutionary origins, which we'll discuss briefly before describing their structures. In this section, we will also consider the peroxisome, an oxidative organelle. The evolutionary origin of the peroxisome, as well as its relation to other organelles, is still a matter of some debate.

The Evolutionary Origins of Mitochondria and Chloroplasts

EVOLUTION Mitochondria and chloroplasts display similarities with bacteria that led to the **endosymbiont theory**, illustrated in **Figure 7.16**. This theory states that an early ancestor of eukaryotic cells engulfed an oxygen-using nonphotosynthetic prokaryotic cell. Eventually, the engulfed cell formed a relationship with the host cell in which it was enclosed, becoming an *endosymbiont* (a cell living within another cell). Indeed, over the course of evolution, the host cell and its endosymbiont merged into a single organism, a eukaryotic cell with a mitochondrion. At least one of these cells may have then taken up a photosynthetic prokaryote, becoming the ancestor of eukaryotic cells that contain chloroplasts.

This is a widely accepted theory, which we will discuss in more detail in Concept 25.3. This theory is consistent with many structural features of mitochondria and chloroplasts. First, rather than being bounded by a single membrane like organelles of the endomembrane system, mitochondria and typical chloroplasts have two membranes surrounding them. (Chloroplasts also have an internal system of membranous sacs.) There is evidence that the ancestral engulfed

Figure 7.16 The endosymbiont theory of the origins of mitochondria and chloroplasts in eukaryotic cells. According to this theory, the proposed ancestors of mitochondria were oxygen-using nonphotosynthetic prokaryotes, while the proposed ancestors of chloroplasts were photosynthetic prokaryotes. The large arrows represent change over evolutionary time; the small arrows inside the cells show the process of the endosymbiont becoming an organelle, also over long periods of time.



prokaryotes had two outer membranes, which became the double membranes of mitochondria and chloroplasts. Second, like prokaryotes, mitochondria and chloroplasts contain ribosomes, as well as circular DNA molecules—like bacterial chromosomes—associated with their inner membranes. The DNA in these organelles programs the synthesis of some organelle proteins on ribosomes that have been synthesized and assembled there as well. Third, also consistent with their probable evolutionary origins as cells, mitochondria and chloroplasts are autonomous (somewhat independent) organelles that grow and reproduce within the cell.

Next, we focus on the structures of mitochondria and chloroplasts, while providing an overview of their structures and functions. (In Chapters 10 and 11, we will examine their roles as energy transformers.)

Mitochondria: Chemical Energy Conversion

Mitochondria are found in nearly all eukaryotic cells, including those of plants, animals, fungi, and most unicellular eukaryotes. Some cells have a single large mitochondrion,

but more often a cell has hundreds or even thousands of mitochondria; the number correlates with the cell's level of metabolic activity. For example, cells that move or contract have proportionally more mitochondria per volume than less active cells.

Each of the two membranes enclosing the mitochondrion is a phospholipid bilayer with a unique collection of embedded proteins (Figure 7.17). The outer membrane is smooth, but the inner membrane is convoluted, with infoldings called **cristae**. The inner membrane divides the mitochondrion into two internal compartments. The first is the intermembrane space, the narrow region between the inner and outer membranes. The second compartment, the **mitochondrial matrix**, is enclosed by the inner membrane. The matrix contains many different enzymes as well as the mitochondrial DNA and ribosomes. Enzymes in the matrix catalyze some of the steps of cellular respiration. Other proteins that function in respiration, including the enzyme that makes ATP, are built into the inner membrane. As highly folded surfaces, the cristae give the inner mitochondrial membrane a large surface area, thus enhancing the productivity of cellular respiration. This is another example of structure fitting function.

Mitochondria are generally in the range of 1–10 μm long. Time-lapse films of living cells reveal mitochondria moving around, changing their shapes, and fusing or dividing in two, unlike the static structures seen in electron micrographs of dead cells. These studies helped cell biologists understand that mitochondria in a living cell form a branched tubular network, seen in a whole cell in Figure 7.17b, that is in a dynamic state of flux.

Chloroplasts: Capture of Light Energy

Chloroplasts contain the green pigment chlorophyll, along with enzymes and other molecules that function in the photosynthetic production of sugar. These lens-shaped organelles, about 3–6 μm in length, are found in leaves and other green organs of plants and in algae (Figure 7.18; see also Figure 7.26c).

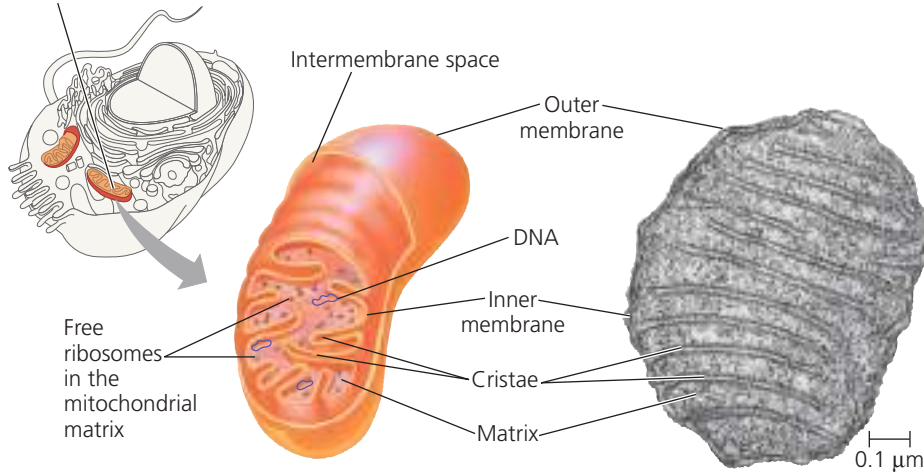
The contents of a chloroplast are partitioned from the cytosol by an envelope consisting of two membranes separated by a very narrow intermembrane space. Inside the chloroplast is another membranous system in the form of flattened, interconnected sacs called **thylakoids**. In some regions, thylakoids are stacked like poker chips; each stack is called a **granum** (plural, *grana*). The fluid outside the thylakoids is the **stroma**, which contains the chloroplast DNA and ribosomes as well as many enzymes. The membranes of the chloroplast divide the chloroplast space into three compartments: the intermembrane space, the stroma, and the thylakoid space. This compartmental organization enables the chloroplast to convert light energy to chemical energy

▼ **Figure 7.17 The mitochondrion, site of cellular respiration.** (a) The inner and outer membranes of the mitochondrion are evident in the drawing and electron micrograph (TEM). The cristae are infoldings of the inner membrane, which increase its surface area. The cutaway drawing shows the two compartments bounded

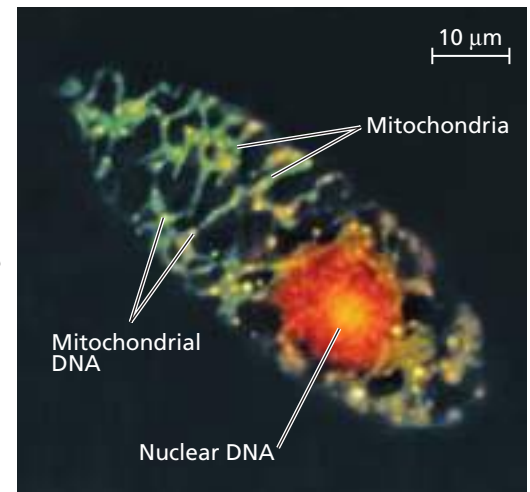
by the membranes: the intermembrane space and the mitochondrial matrix. Many respiratory enzymes are found in the inner membrane and the matrix. Free ribosomes are also present in the matrix. The circular DNA molecules are associated with the inner mitochondrial membrane. (b) The light micrograph shows an

entire unicellular eukaryote (*Euglena gracilis*) at a much lower magnification than the TEM. The mitochondria form a branched tubular network. The nuclear DNA has been stained green. The mitochondria form a branched tubular network. The nuclear DNA is stained red; molecules of mitochondrial DNA appear as bright yellow spots.

Mitochondrion



(a) Diagram and TEM of mitochondrion



(b) Network of mitochondria in *Euglena* (LM)

 **BioFlix® Animation: Mitochondria**

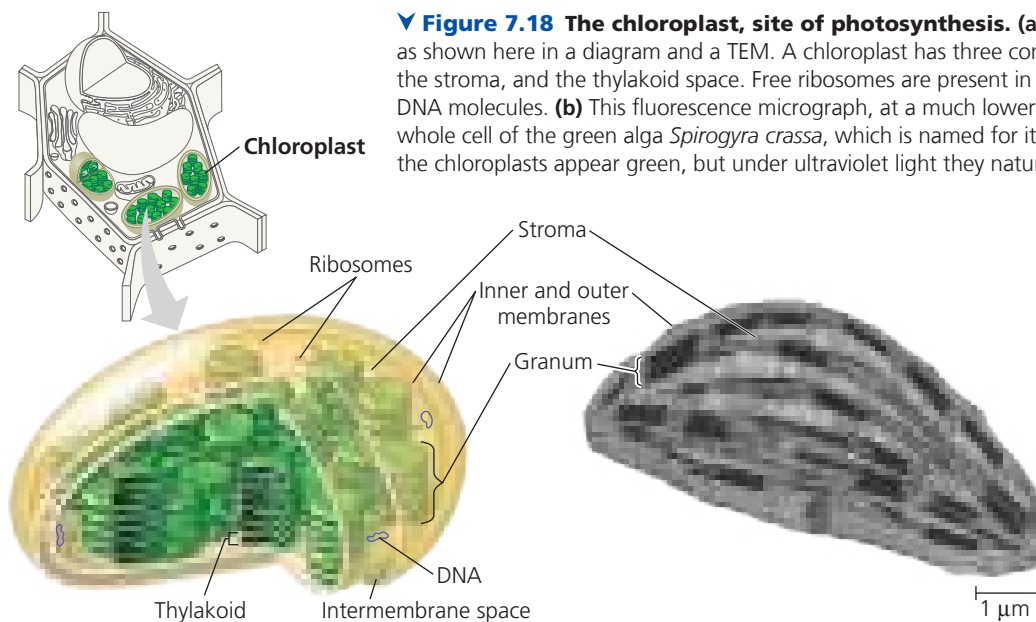
during photosynthesis. (You will learn more about photosynthesis in Chapter 11.)

As with mitochondria, the static and rigid appearance of chloroplasts in micrographs or schematic diagrams cannot accurately depict their dynamic behavior in the living cell. Their shape is changeable, and they grow and occasionally pinch in two, reproducing themselves. They are mobile and, with mitochondria and other organelles, move around the

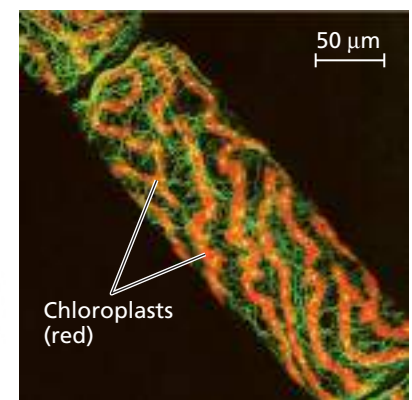
cell along tracks of the cytoskeleton, a structural network we will consider in Concept 7.6.

The chloroplast is a specialized member of a family of closely related plant organelles called **plastids**. One type of plastid, the *amyloplast*, is a colorless organelle that stores starch (amylose), particularly in roots and tubers. Another is the *chromoplast*, which has pigments that give fruits and flowers their orange and yellow hues.

▼ **Figure 7.18 The chloroplast, site of photosynthesis.** (a) Many plants have lens-shaped chloroplasts, as shown here in a diagram and a TEM. A chloroplast has three compartments: the intermembrane space, the stroma, and the thylakoid space. Free ribosomes are present in the stroma, as are copies of chloroplast DNA molecules. (b) This fluorescence micrograph, at a much lower magnification than the TEM, shows a whole cell of the green alga *Spirogyra crassa*, which is named for its spiral chloroplasts. Under natural light the chloroplasts appear green, but under ultraviolet light they naturally fluoresce red, as shown here.



(a) Diagram and TEM of chloroplast

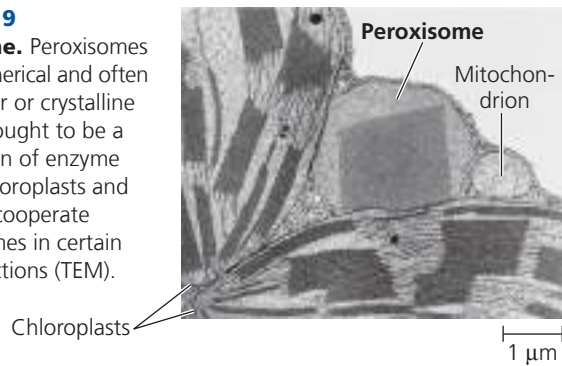


(b) Chloroplasts in an algal cell

 **BioFlix® Animation: Chloroplasts and Mitochondria**

► Figure 7.19

A peroxisome. Peroxisomes are roughly spherical and often have a granular or crystalline core that is thought to be a dense collection of enzyme molecules. Chloroplasts and mitochondria cooperate with peroxisomes in certain metabolic functions (TEM).



Peroxisomes: Oxidation

The **peroxisome** is a specialized metabolic compartment bounded by a single membrane (Figure 7.19). Peroxisomes contain enzymes that remove hydrogen atoms from various substrates and transfer them to oxygen (O_2), producing hydrogen peroxide (H_2O_2) as a by-product (from which the organelle derives its name). These reactions have many different functions. Some peroxisomes use oxygen to break fatty acids down into smaller molecules that are transported to mitochondria and used as fuel for cellular respiration. Peroxisomes in the liver detoxify alcohol and other harmful compounds by transferring hydrogen from the poisonous compounds to oxygen. The H_2O_2 formed by peroxisomes is itself toxic, but the organelle also contains an enzyme that converts H_2O_2 to water. This is an excellent example of how the cell's compartmental structure is crucial to its functions: The enzymes that produce H_2O_2 and those that dispose of this toxic compound are sequestered away from other cellular components that could be damaged.

Specialized peroxisomes called *glyoxysomes* are found in the fat-storing tissues of plant seeds. These organelles contain enzymes that initiate the conversion of fatty acids to sugar, which the emerging seedling uses as a source of energy and carbon until it can produce its own sugar by photosynthesis.

How peroxisomes are related to other organelles is still an open question. They grow larger by incorporating proteins made in the cytosol and ER, as well as lipids made in the ER and within the peroxisome itself. Peroxisomes may increase in number by splitting in two when they reach a certain size, sparking the suggestion of an endosymbiotic evolutionary origin, but others argue against this scenario. Discussion of this issue is ongoing.

CONCEPT CHECK 7.5

1. Describe two characteristics shared by chloroplasts and mitochondria. Consider both function and membrane structure.
2. Do plant cells have mitochondria? Explain.
3. **WHAT IF? ►** A classmate proposes that mitochondria and chloroplasts should be classified in the endomembrane system. Argue against the proposal.

For suggested answers, see Appendix A.

CONCEPT 7.6

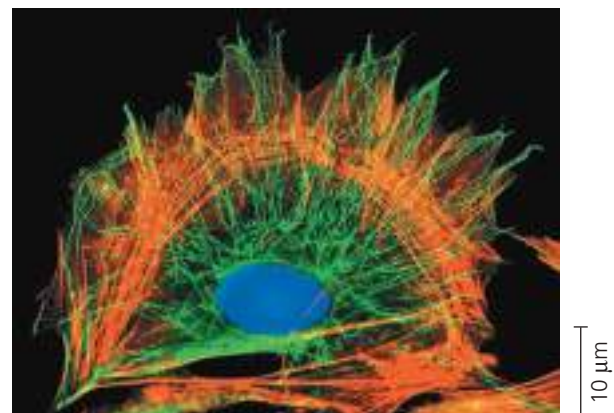
The cytoskeleton is a network of fibers that organizes structures and activities in the cell

In the early days of electron microscopy, biologists thought that the organelles of a eukaryotic cell floated freely in the cytosol. But improvements in both light microscopy and electron microscopy have revealed the **cytoskeleton**, a network of fibers extending throughout the cytoplasm (Figure 7.20). Bacterial cells also have fibers that form a type of cytoskeleton, constructed of proteins similar to eukaryotic ones, but here we will concentrate on eukaryotes. The eukaryotic cytoskeleton, which plays a major role in organizing the structures and activities of the cell, is composed of three types of molecular structures: microtubules, microfilaments, and intermediate filaments.

Roles of the Cytoskeleton: Support and Motility

The most obvious function of the cytoskeleton is to give mechanical support to the cell and maintain its shape. This is especially important for animal cells, which lack walls. The remarkable strength and resilience of the cytoskeleton as a whole are based on its architecture. Like a dome tent, the cytoskeleton is stabilized by a balance between opposing forces exerted by its elements. And just as the skeleton of an animal helps fix the positions of other body parts, the cytoskeleton provides anchorage for many organelles and even cytosolic enzyme molecules. The cytoskeleton is more dynamic than an animal skeleton, however. It can be quickly dismantled in one part of the cell and reassembled in a new location, changing the shape of the cell.

▼ **Figure 7.20 The cytoskeleton.** As shown in this fluorescence micrograph, the cytoskeleton extends throughout the cell. The cytoskeletal elements have been tagged with different fluorescent molecules: green for microtubules and reddish-orange for microfilaments. A third component of the cytoskeleton, intermediate filaments, is not evident here. (The blue color tags the DNA in the nucleus.)



 BioFlix® Animation: Cytoskeleton

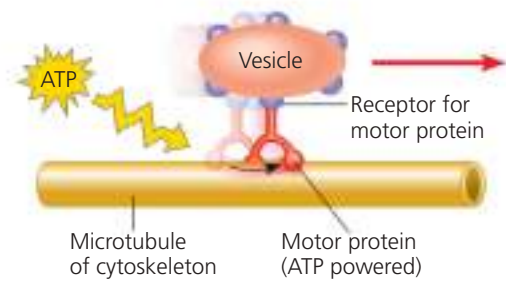
Some types of cell motility (movement) also involve the cytoskeleton. The term *cell motility* includes both changes in cell location and movements of cell parts. Cell motility generally requires interaction of the cytoskeleton with **motor proteins**. There are many such examples: Cytoskeletal elements and motor proteins work together with plasma membrane molecules to allow whole cells to move along fibers outside the cell. Inside the cell, vesicles and other organelles often use motor protein “feet” to “walk” to their destinations along a track provided by the cytoskeleton. For example, this is how vesicles containing neurotransmitter molecules migrate to the tips of axons, the long extensions of nerve cells that release these molecules as chemical signals to adjacent nerve cells (Figure 7.21). The cytoskeleton also manipulates the plasma membrane, bending it inward to form food vacuoles or other phagocytic vesicles.

 Interview with George Langford: Investigating how motor proteins move cargo

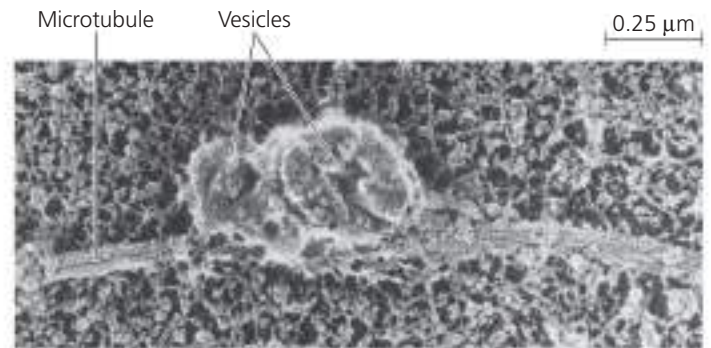
Components of the Cytoskeleton

Now let’s look more closely at the three main types of fibers that make up the cytoskeleton: *Microtubules* are the thickest of the three types; *microfilaments* (also called actin filaments) are the thinnest; and *intermediate filaments* are fibers with diameters in a middle range (Table 7.1).

Figure 7.21 Motor proteins and the cytoskeleton.

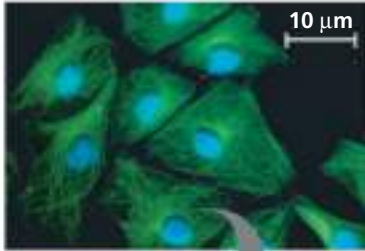
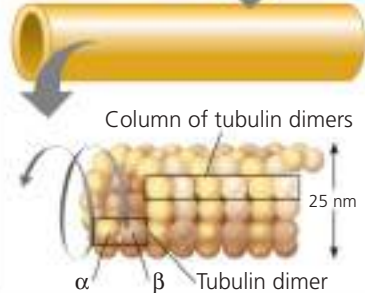

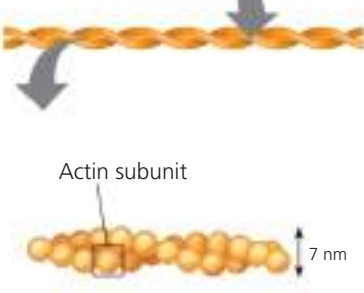
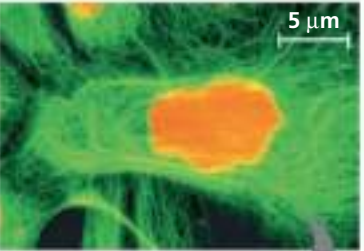
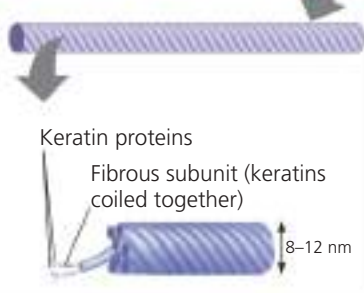


(a) Motor proteins that attach to receptors on vesicles can “walk” the vesicles along microtubules or, in some cases, along microfilaments.



(b) Two vesicles containing neurotransmitters move along a microtubule toward the tip of a nerve cell extension called an axon (SEM).

Table 7.1 The Structure and Function of the Cytoskeleton

Property	Microtubules (Tubulin Polymers)	Microfilaments (Actin Filaments)	Intermediate Filaments
Structure	Hollow tubes	Two intertwined strands of actin	Fibrous proteins coiled into cables
Diameter	25 nm with 15-nm lumen	7 nm	8–12 nm
Protein subunits	Tubulin, a dimer consisting of α -tubulin and β -tubulin	Actin	One of several different proteins (such as keratins)
Main functions	Maintenance of cell shape (compression-resisting “girders”); cell motility (as in cilia or flagella); chromosome movements in cell division; organelle movements	Maintenance of cell shape (tension-bearing elements); changes in cell shape; muscle contraction; cytoplasmic streaming in plant cells; cell motility (as in amoeboid movement); division of animal cells	Maintenance of cell shape (tension-bearing elements); anchorage of nucleus and certain other organelles; formation of nuclear lamina
Fluorescence micrographs of fibroblasts. Fibroblasts are a favorite cell type for cell biology studies because they spread out flat and their internal structures are easy to see. In each, the structure of interest has been tagged with fluorescent molecules. The DNA in the nucleus has also been tagged in the first micrograph (blue) and third micrograph (orange).	  <p>Column of tubulin dimers</p> <p>25 nm</p> <p>α β Tubulin dimer</p>	  <p>Actin subunit</p> <p>7 nm</p>	  <p>Keratin proteins</p> <p>Fibrous subunit (keratins coiled together)</p> <p>8–12 nm</p>

Microtubules

All eukaryotic cells have **microtubules**, hollow rods constructed from globular proteins called tubulins. Each tubulin protein is a *dimer*, a molecule made up of two subunits. A tubulin dimer consists of two slightly different polypeptides, α -tubulin and β -tubulin. Microtubules grow in length by adding tubulin dimers; they can also be disassembled and their tubulins used to build microtubules elsewhere in the cell. Because of the orientation of tubulin dimers, the two ends of a microtubule are slightly different. One end can accumulate or release tubulin dimers at a much higher rate than the other, thus growing and shrinking significantly during cellular activities. (This is called the “plus end,” not because it can only add tubulin proteins but because it’s the end where both “on” and “off” rates are much higher.)

Microtubules shape and support the cell and also serve as tracks along which organelles equipped with motor proteins can move. In addition to the example in Figure 7.21, microtubules guide vesicles from the ER to the Golgi apparatus and from the Golgi to the plasma membrane. Microtubules are also involved in the separation of chromosomes during cell division, as shown in Figure 12.7.

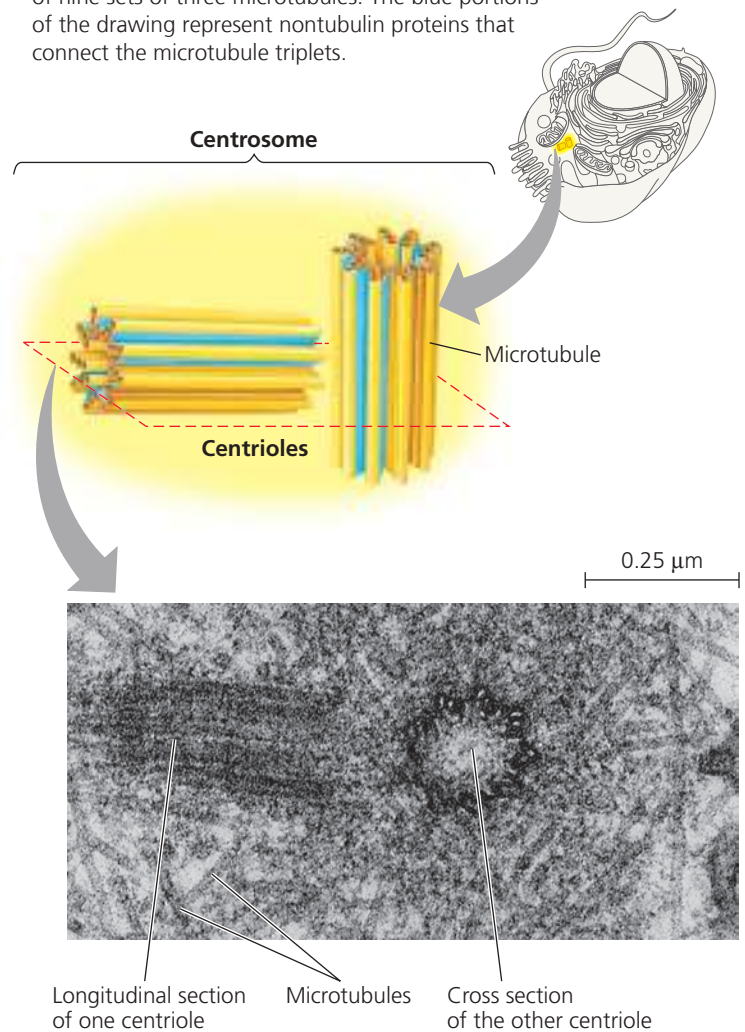
Centrosomes and Centrioles In animal cells, microtubules grow out from a **centrosome**, a region that is often located near the nucleus. These microtubules function as compression-resisting girders of the cytoskeleton. Within the centrosome is a pair of **centrioles**, each composed of nine sets of triplet microtubules arranged in a ring (**Figure 7.22**). Although centrosomes with centrioles may help organize microtubule assembly in animal cells, many other eukaryotic cells lack centrosomes with centrioles and instead organize microtubules by other means.

Cilia and Flagella In eukaryotes, a specialized arrangement of microtubules is responsible for the beating of **flagella** (singular, *flagellum*) and **cilia** (singular, *cilium*), microtubule-containing extensions that project from some cells. (The bacterial flagellum, shown in Figure 7.5, has a completely different structure.) Many unicellular eukaryotes are propelled through water by cilia or flagella that act as locomotor appendages, and the sperm of animals, algae, and some plants have flagella. When cilia or flagella extend from cells that are held in place as part of a tissue layer, they can move fluid over the surface of the tissue. For example, the ciliated lining of the trachea (windpipe) sweeps mucus containing trapped debris out of the lungs (see the EMs in Figure 7.3). In a woman’s reproductive tract, the cilia lining the oviducts help move an egg toward the uterus.

Motile cilia usually occur in large numbers on the cell surface. Flagella are usually limited to just one or a few per cell, and they are longer than cilia. Flagella and cilia differ in their

▼ Figure 7.22 Centrosome containing a pair of centrioles.

Most animal cells have a centrosome, a region near the nucleus where the cell’s microtubules are initiated. Within the centrosome is a pair of centrioles, each about 250 nm (0.25 μ m) in diameter. The two centrioles are at right angles to each other, and each is made up of nine sets of three microtubules. The blue portions of the drawing represent nontubulin proteins that connect the microtubule triplets.



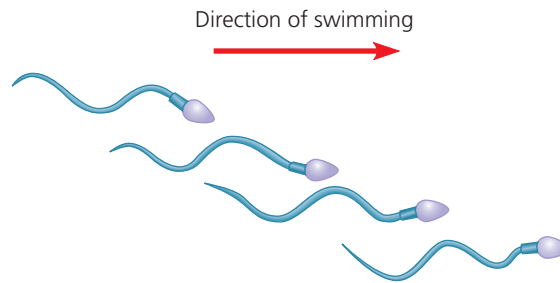
VISUAL SKILLS ► How many microtubules are in a centrosome? In the drawing, circle and label one microtubule and describe its structure. Circle and label a triplet.

beating patterns. A flagellum has an undulating motion like the tail of a fish. In contrast, cilia have alternating power and recovery strokes, much like the oars of a racing crew boat (**Figure 7.23**).


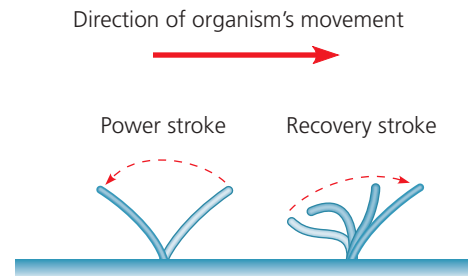
A cilium may also act as a signal-receiving “antenna” for the cell. Cilia that have this function are generally nonmotile, and there is only one per cell. (In fact, in vertebrate animals, it appears that almost all cells have such a cilium, which is called a *primary cilium*.) Membrane proteins on this kind of cilium transmit molecular signals from the cell’s environment to its interior, triggering signaling pathways that may lead to changes in the cell’s activities. Cilium-based signaling appears to be crucial to brain function and to embryonic development.

▼ **Figure 7.23** A comparison of the beating of flagella and motile cilia.

(a) Motion of flagella. A flagellum usually undulates, its snakelike motion driving a cell in the same direction as the axis of the flagellum. Propulsion of a human sperm cell is an example of flagellate locomotion (LM).



(b) Motion of cilia. Cilia have a back-and-forth motion. The rapid power stroke moves the cell in a direction perpendicular to the axis of the cilium. Then, during the slower recovery stroke, the cilium bends and sweeps sideways, closer to the cell surface. A dense nap of cilia, beating at a rate of about 40 to 60 strokes a second, covers this *Colpidium*, a freshwater protist (colorized SEM).



Video: Flagellum Movement in Swimming Sperm
Video: Flagellum Beating with ATP
Video: Paramecium Cilia

Though different in length, number per cell, and beating pattern, motile cilia and flagella share a common structure. Each motile cilium or flagellum has a group of microtubules sheathed in an extension of the plasma membrane (**Figure 7.24a**). Nine doublets of microtubules are arranged in a ring with two single microtubules in its center (**Figure 7.24b**). This arrangement, referred to as the “9 + 2” pattern, is found in nearly all eukaryotic flagella and motile cilia. (Nonmotile primary cilia have a “9 + 0” pattern, lacking the central pair of microtubules.) The microtubule assembly of a cilium or flagellum is anchored in the cell by a **basal body**, which is structurally very similar to a centriole, with microtubule triplets in a “9 + 0” pattern (**Figure 7.24c**). In fact, in many animals (including humans), the basal body of the fertilizing sperm’s flagellum enters the egg and becomes a centriole.

How does the microtubule assembly produce the bending movements of flagella and motile cilia? Bending involves large motor proteins called **dyneins** (red in the diagram in Figure 7.24) that are attached along each outer microtubule doublet. A typical dynein protein has two “feet” that “walk” along the microtubule of the adjacent doublet, using ATP for energy. One foot maintains contact, while the other releases and reattaches one step farther

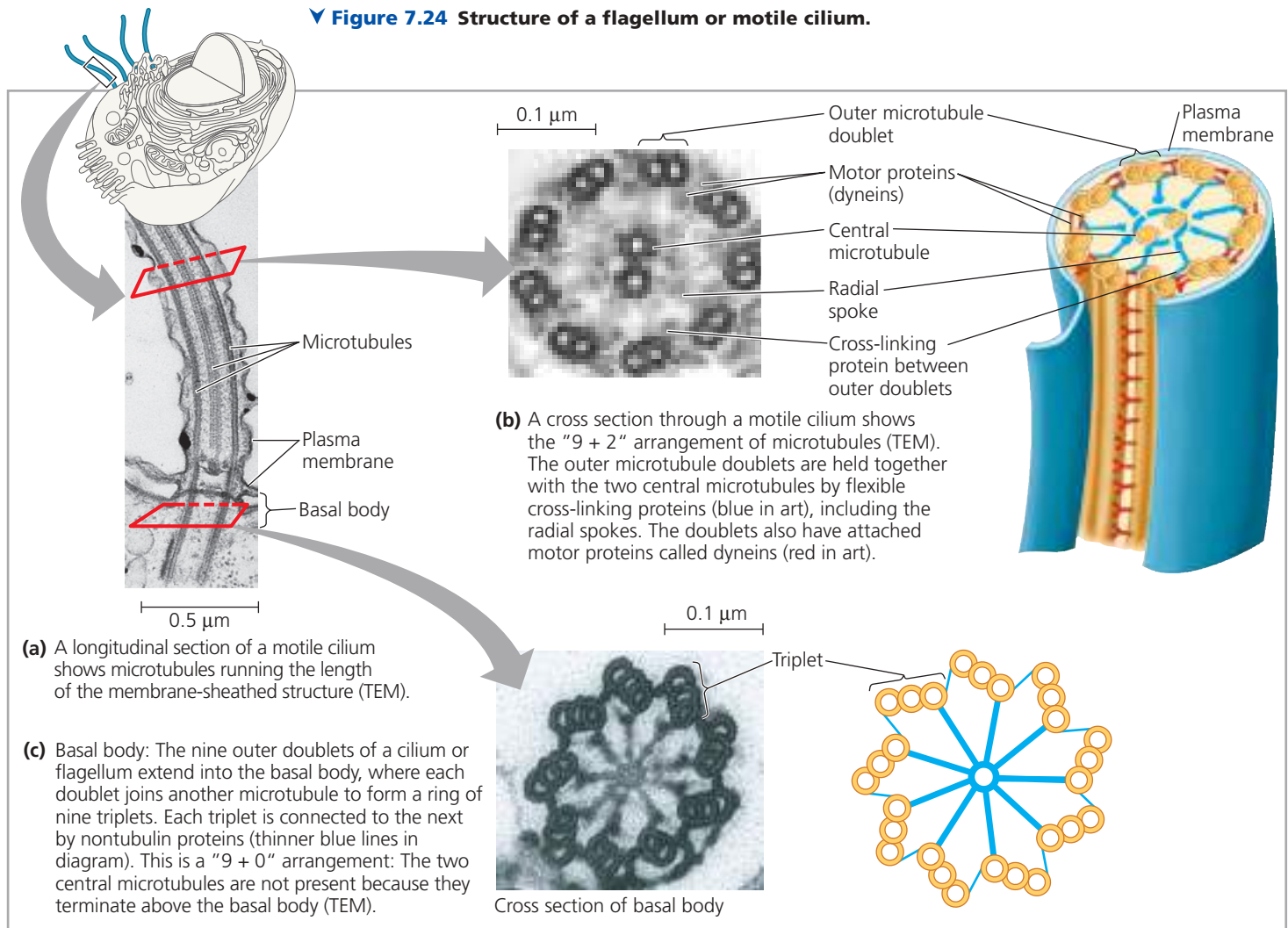
along the microtubule (see Figure 7.21). The outer doublets and two central microtubules are held together by flexible cross-linking proteins (blue in the diagram in Figure 7.24), and the walking movement is coordinated so that it happens on one side of the circle at a time. If the doublets were not held in place, the walking action would make them slide past each other. Instead, the movements of the dynein feet cause the microtubules—and the organelle as a whole—to bend.

Microfilaments (Actin Filaments)

Microfilaments are thin solid rods. They are also called actin filaments because they are built from molecules of **actin**, a globular protein. A microfilament is a twisted double chain of actin subunits (see Table 7.1). Besides occurring as linear filaments, microfilaments can form structural networks when certain proteins bind along the side of such a filament and allow a new filament to extend as a branch. Like microtubules, microfilaments seem to be present in all eukaryotic cells.

In contrast to the compression-resisting role of microtubules, the structural role of microfilaments in the cytoskeleton is to bear tension (pulling forces). A three-dimensional

▼ **Figure 7.24 Structure of a flagellum or motile cilium.**



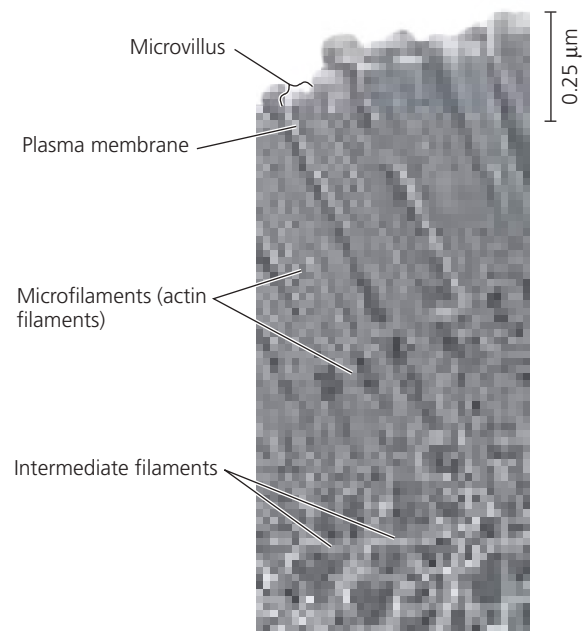
DRAW IT ▶ In (a) and (b), circle and label the central pair of microtubules. In (a), show where they terminate, and explain why they aren't seen in the cross section of the basal body in (c).

Animation: Cilia and Flagella

network formed by microfilaments just inside the plasma membrane (*cortical microfilaments*) helps support the cell's shape (see Figure 7.8). This network gives the outer cytoplasmic layer of a cell, called the **cortex**, the semisolid consistency of a gel, in contrast with the more fluid state of the interior cytoplasm. In some kinds of animal cells, such as nutrient-absorbing intestinal cells, bundles of microfilaments make up the core of microvilli, delicate projections that increase the cell's surface area (**Figure 7.25**).

Microfilaments are well known for their role in cell motility. Thousands of actin filaments and thicker filaments

▶ **Figure 7.25 A structural role of microfilaments.** The surface area of this nutrient-absorbing intestinal cell is increased by its many microvilli (singular, *microvillus*), cellular extensions reinforced by bundles of microfilaments. These actin filaments are anchored to a network of intermediate filaments (TEM).



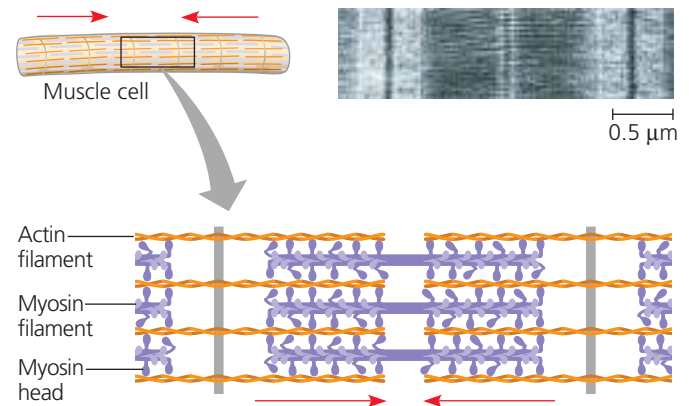
made of a protein called **myosin** interact to cause contraction of muscle cells (**Figure 7.26a**); muscle contraction is described in detail in Concept 50.5. In the unicellular eukaryote *Amoeba* and some of our white blood cells, localized contractions brought about by actin and myosin are involved in the amoeboid (crawling) movement of the cells. The cell crawls along a surface by extending cellular extensions called **pseudopodia** (from the Greek *pseudes*, false, and *pod*, foot) and moving toward them (**Figure 7.26b**). In plant cells, actin-protein interactions contribute to **cytoplasmic streaming**, a circular flow of cytoplasm within cells (**Figure 7.26c**). This movement, which is especially common in large plant cells, speeds the movement of organelles and the distribution of materials within the cell.

Intermediate Filaments

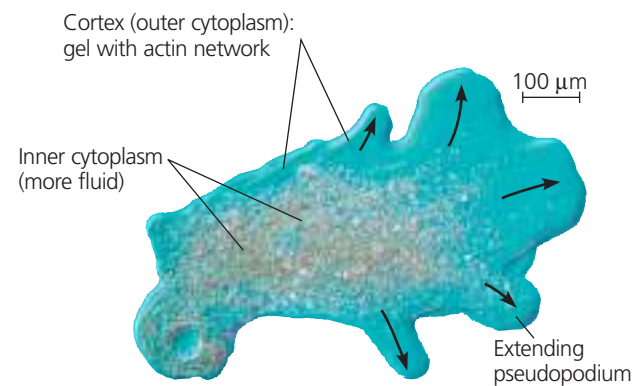
Intermediate filaments are named for their diameter, which is larger than the diameter of microfilaments but smaller than that of microtubules (see Table 7.1). While microtubules and microfilaments are found in all eukaryotic cells, intermediate filaments are only found in the cells of some animals, including vertebrates. Specialized for bearing tension (like microfilaments), intermediate filaments are a diverse class of cytoskeletal elements. Each type is constructed from a particular molecular subunit belonging to a family of proteins whose members include the keratins. Microtubules and microfilaments, in contrast, are consistent in diameter and composition in all eukaryotic cells.

Intermediate filaments are more permanent fixtures of cells than are microfilaments and microtubules, which are often disassembled and reassembled in various parts of a cell. Even after cells die, intermediate filament networks often persist; for example, the outer layer of our skin consists of dead skin cells full of keratin filaments. Chemical treatments that remove microfilaments and microtubules from the cytoplasm of living cells leave a web of intermediate filaments that retains its original shape. Such experiments suggest that intermediate filaments are especially sturdy and that they play an important role in reinforcing the shape of a cell and fixing the position of certain organelles. For instance, the nucleus typically sits within a cage made of intermediate filaments, fixed in location by branches of the filaments that extend into the cytoplasm. Other intermediate filaments make up the nuclear lamina, which lines the interior of the nuclear envelope (see Figure 7.9). By supporting a cell's shape, intermediate filaments help the cell carry out its specific function. For example, the network of intermediate filaments shown in Figure 7.25 anchors the microfilaments supporting the intestinal microvilli. Thus, the various kinds of intermediate filaments may function together as the permanent framework of the entire cell.

▼ Figure 7.26 Microfilaments and motility. In these three examples, interactions between actin filaments and motor proteins bring about cell movement.




(a) Myosin motors in muscle cell contraction. The “walking” of myosin projections (the so-called heads) drives the parallel myosin and actin filaments past each other so that the actin filaments approach each other in the middle (red arrows). This shortens the muscle cell. Muscle contraction involves the shortening of many muscle cells at the same time (TEM).



(b) Amoeboid movement. Interaction of actin filaments with myosin causes contraction of the cell, pulling the cell's trailing end (at left) forward (to the right) (LM).



(c) Cytoplasmic streaming in plant cells. A layer of cytoplasm cycles around the cell, moving over tracks of actin filaments. Myosin motors attached to some organelles drive the streaming by interacting with the actin (LM).

 **BioFlix® Animation: Actin and Myosin in Muscle Contraction**
Video: Amoeba Pseudopodia
Video: Cytoplasmic Streaming

CONCEPT CHECK 7.6

1. Describe how cilia and flagella bend.
2. **WHAT IF? >** Males afflicted with Kartagener's syndrome are sterile because of immotile sperm, and they tend to suffer from lung infections. This disorder has a genetic basis. Suggest what the underlying defect might be.

For suggested answers, see Appendix A.

CONCEPT 7.7

Extracellular components and connections between cells help coordinate cellular activities

Having crisscrossed the cell to explore its interior components, we complete our tour of the cell by returning to the surface of this microscopic world, where there are additional structures with important functions. The plasma membrane is usually regarded as the boundary of the living cell, but most cells synthesize and secrete materials extracellularly (to the outside of the cell). Although these materials and the structures they form are outside the cell, their study is important to cell biology because they are involved in a great many essential cellular functions.

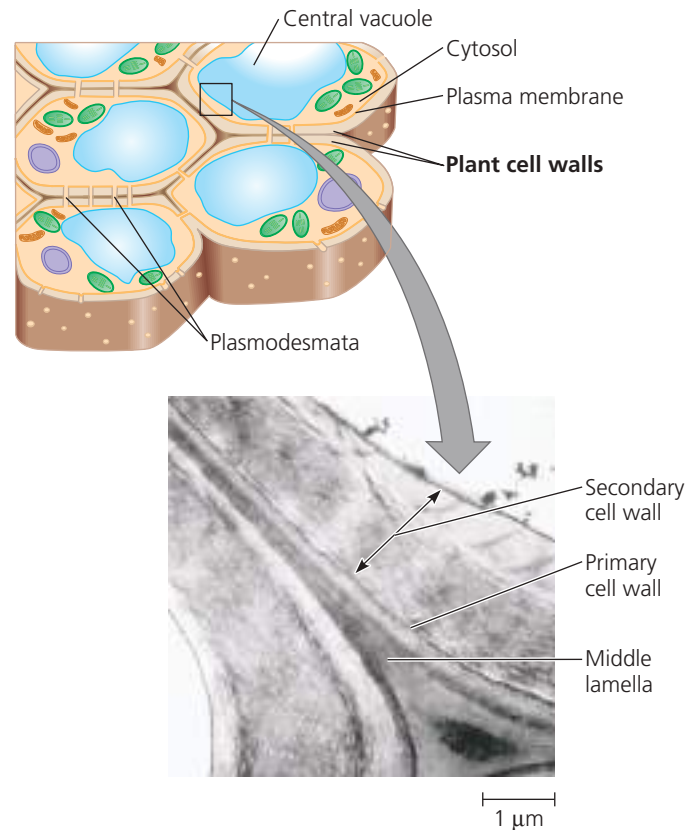
Cell Walls of Plants

The **cell wall** is an extracellular structure of plant cells (Figure 7.27). This is one of the features that distinguishes plant cells from animal cells. The wall protects the plant cell, maintains its shape, and prevents excessive uptake of water. On the level of the whole plant, the strong walls of specialized cells hold the plant up against the force of gravity. Prokaryotes, fungi, and some unicellular eukaryotes also have cell walls, as you saw in Figures 7.5 and 7.8, but we will postpone discussion of them until Unit Five.

Plant cell walls are much thicker than the plasma membrane, ranging from 0.1 μm to several micrometers. The exact chemical composition of the wall varies from species to species and even from one cell type to another in the same plant, but the basic design of the wall is consistent. Microfibrils made of the polysaccharide cellulose (see Figure 5.6) are synthesized by an enzyme called cellulose synthase and secreted to the extracellular space, where they become embedded in a matrix of other polysaccharides and proteins. This combination of materials, strong fibers in a "ground substance" (matrix), is the same basic architectural design found in steel-reinforced concrete and in fiberglass.

A young plant cell first secretes a relatively thin and flexible wall called the **primary cell wall** (see the micrograph in Figure 7.27). Between primary walls of adjacent cells is the **middle lamella**, a thin layer rich in sticky polysaccharides called pectins. The middle lamella glues adjacent cells together. (Pectin is used in cooking as a thickening agent in

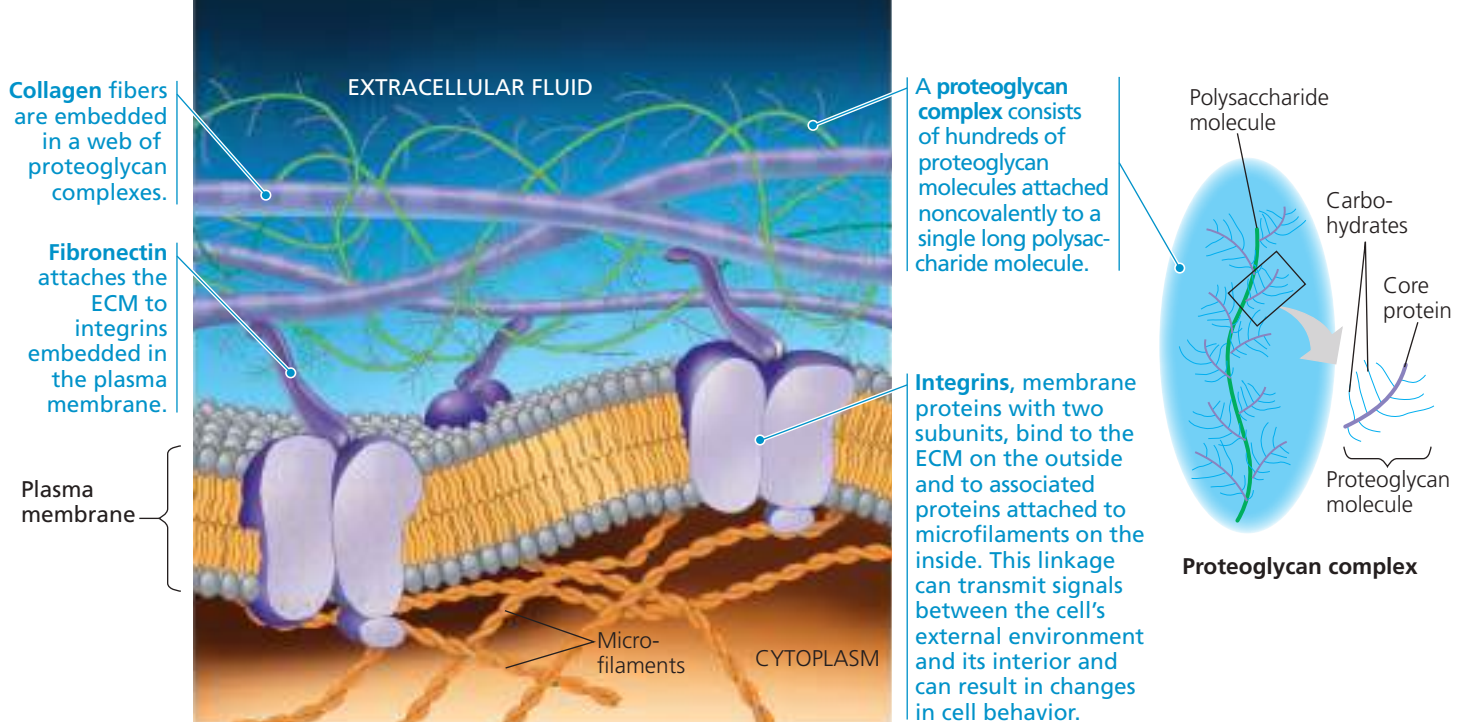
Figure 7.27 Plant cell walls. The drawing shows several cells, each with a cell wall, large vacuole, a nucleus, and several chloroplasts and mitochondria. The TEM shows the cell walls where two cells come together. The multilayered partition between plant cells consists of adjoining walls individually secreted by the cells.



jams and jellies.) When the cell matures and stops growing, it strengthens its wall. Some plant cells do this simply by secreting hardening substances into the primary wall. Other cells add a **secondary cell wall** between the plasma membrane and the primary wall. The secondary wall, often deposited in several laminated layers, has a strong and durable matrix that affords the cell protection and support. Wood, for example, consists mainly of secondary walls. Plant cell walls are usually perforated by channels between adjacent cells called plasmodesmata, which will be discussed shortly.

The Extracellular Matrix (ECM) of Animal Cells

Although animal cells lack walls akin to those of plant cells, they do have an elaborate **extracellular matrix (ECM)**. The main ingredients of the ECM are glycoproteins and other carbohydrate-containing molecules secreted by the cells. (Recall that glycoproteins are proteins with covalently bonded carbohydrates, usually short chains of sugars.) The most abundant glycoprotein in the ECM of most animal cells is **collagen**, which forms strong fibers outside the cells (see Figure 5.18). In fact, collagen accounts for about 40% of the total protein in the human body. The collagen fibers are embedded in a network woven out of **proteoglycans**



▲ Figure 7.28 Extracellular matrix (ECM) of an animal cell. The molecular composition and structure of the ECM vary from one cell type to another. In this example, three different types of ECM molecules are present: collagen, fibronectin, and proteoglycans.

secreted by cells (**Figure 7.28**). A proteoglycan molecule consists of a small core protein with many carbohydrate chains covalently attached, so that it may be up to 95% carbohydrate. Large proteoglycan complexes can form when hundreds of proteoglycan molecules become noncovalently attached to a single long polysaccharide molecule, as shown in **Figure 7.28**. Some cells are attached to the ECM by ECM glycoproteins such as **fibronectin**. Fibronectin and other ECM proteins bind to cell-surface receptor proteins called **integrins** that are built into the plasma membrane. Integrins span the membrane and bind on their cytoplasmic side to associated proteins attached to microfilaments of the cytoskeleton. The name *integrin* is based on the word *integrate*: Integrins are in a position to transmit signals between the ECM and the cytoskeleton and thus to integrate changes occurring outside and inside the cell.

Current research on fibronectin, other ECM molecules, and integrins reveals the influential role of the ECM in the lives of cells. By communicating with a cell through integrins, the ECM can regulate a cell's behavior. For example, some cells in a developing embryo migrate along specific pathways by matching the orientation of their microfilaments to the “grain” of fibers in the extracellular matrix. Researchers have also learned that the extracellular matrix around a cell can influence the activity of genes in the nucleus. Information about the ECM probably reaches the nucleus by a combination of mechanical and chemical signaling pathways. Mechanical signaling involves fibronectin, integrins, and microfilaments of the cytoskeleton. Changes in the cytoskeleton may in turn trigger signaling pathways inside the cell, leading to changes in the set

of proteins being made by the cell and therefore changes in the cell's function. In this way, the extracellular matrix of a particular tissue may help coordinate the behavior of all the cells of that tissue. Direct connections between cells also function in this coordination, as we discuss next.

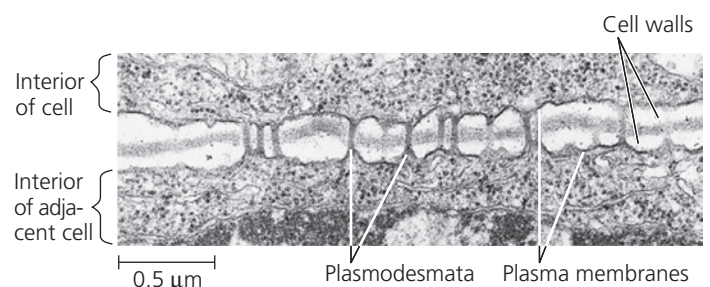
Cell Junctions

Cells in an animal or plant are organized into tissues, organs, and organ systems. Neighboring cells often adhere, interact, and communicate via sites of direct physical contact.

Plasmodesmata in Plant Cells

It might seem that the nonliving cell walls of plants would isolate plant cells from one another. But in fact, as shown in **Figure 7.29**, cell walls are perforated with **plasmodesmata** (singular, *plasmodesma*; from the Greek *desma*, bond), channels that connect cells. Cytosol passing through the

▼ Figure 7.29 Plasmodesmata between plant cells. The cytoplasm of one plant cell is continuous with the cytoplasm of its neighbors via plasmodesmata, cytoplasmic channels through the cell walls (TEM).



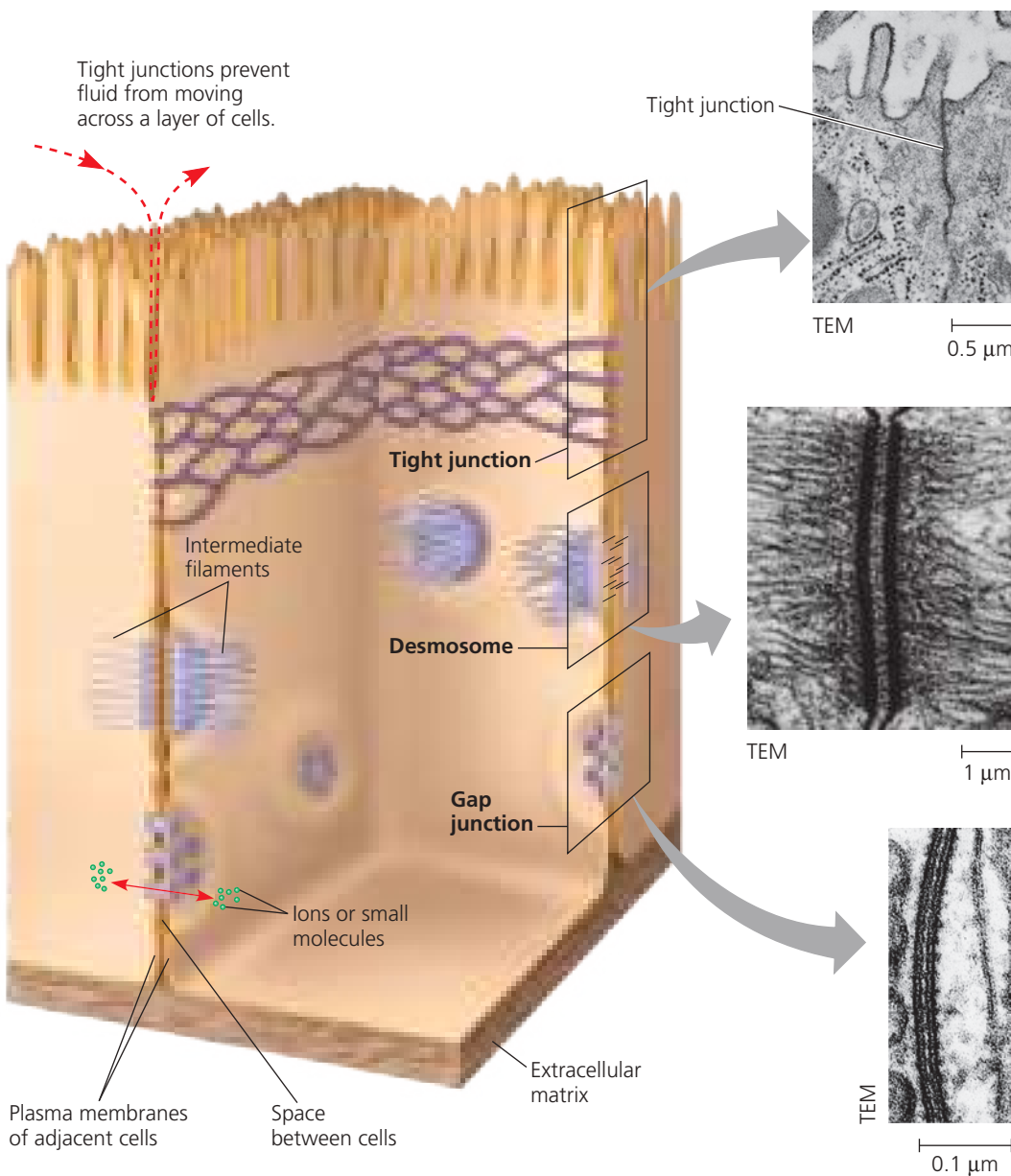
plasmodesmata joins the internal chemical environments of adjacent cells. These connections unify most of the plant into one living continuum. The plasma membranes of adjacent cells line the channel of each plasmodesma and thus are continuous. Water and small solutes can pass freely from cell to cell, and several experiments have shown that in some circumstances, certain proteins and RNA molecules can do this as well (see Concept 36.6). The macromolecules transported to neighboring cells appear to reach the plasmodesmata by moving along fibers of the cytoskeleton.

Tight Junctions, Desmosomes, and Gap Junctions in Animal Cells

In animals, there are three main types of cell junctions: *tight junctions*, *desmosomes*, and *gap junctions*. (Gap junctions are most like the plasmodesmata of plants, although gap junction pores are not lined with membrane.) All three types of cell junctions are especially common in epithelial tissue, which lines the external and internal surfaces of the body.

Figure 7.30 uses epithelial cells of the intestinal lining to illustrate these junctions.

▼ **Figure 7.30 Exploring Cell Junctions in Animal Tissues**



Tight Junctions

At **tight junctions**, the plasma membranes of neighboring cells are very tightly pressed against each other, bound together by specific proteins. Forming continuous seals around the cells, tight junctions establish a barrier that prevents leakage of extracellular fluid across a layer of epithelial cells (see red dashed arrow). For example, tight junctions between skin cells make us watertight.

Desmosomes

Desmosomes (one type of *anchoring junction*) function like rivets, fastening cells together into strong sheets. Intermediate filaments made of sturdy keratin proteins anchor desmosomes in the cytoplasm. Desmosomes attach muscle cells to each other in a muscle. Some “muscle tears” involve the rupture of desmosomes.

Gap Junctions

Gap junctions (also called *communicating junctions*) provide cytoplasmic channels from one cell to an adjacent cell and in this way are similar in their function to the plasmodesmata in plants. Gap junctions consist of membrane proteins that surround a pore through which ions, sugars, amino acids, and other small molecules may pass. Gap junctions are necessary for communication between cells in many types of tissues, such as heart muscle, and in animal embryos.

 **Animation: Cell Junctions**

CONCEPT CHECK 7.7

1. In what way are the cells of plants and animals structurally different from single-celled eukaryotes?
2. **WHAT IF? >** Nonliving cell walls isolate plant cells from one another. Still, most of the plant can be considered to be one living continuum. Explain.
3. **MAKE CONNECTIONS >** The polypeptide chain that makes up a tight junction weaves back and forth through the membrane four times, with two extracellular loops, and one loop plus short C-terminal and N-terminal tails in the cytoplasm. Looking at Figure 5.14, what would you predict about the amino acid sequence of the tight junction protein?

For suggested answers, see Appendix A.

CONCEPT 7.8

A cell is greater than the sum of its parts

From our panoramic view of the cell's compartmental organization to our close-up inspection of each organelle's architecture, this tour of the cell has provided many opportunities to correlate structure with function. (This would be a good time to review cell structure by returning to Figure 7.8.)

 **BioFlix® Animation: Tour of an Animal Cell**
BioFlix® Animation: Tour of a Plant Cell

Even as we dissect the cell, remember that none of its components works alone. As an example of cellular integration, consider the microscopic scene in **Figure 7.31**. The large cell is a macrophage (see Figure 7.13a). It helps defend the mammalian body against infections by ingesting bacteria (the smaller

▼ Figure 7.31 The emergence of cellular functions. The ability of this macrophage (brown) to recognize, apprehend, and destroy *Staphylococcus* bacteria (orange) is a coordinated activity of the whole cell. Its cytoskeleton, lysosomes, and plasma membrane are among the components that function in phagocytosis (colorized SEM).



 **Animation: Review of Animal Cell Structure and Function**

cells) into phagocytic vesicles. The macrophage crawls along a surface and reaches out to the bacteria with thin pseudopodia (specifically, filopodia). Actin filaments interact with other elements of the cytoskeleton in these movements. After the macrophage engulfs the bacteria, they are destroyed by lysosomes produced by the elaborate endomembrane system. The digestive enzymes of the lysosomes and the proteins of the cytoskeleton are all made by ribosomes. And the synthesis of these proteins is programmed by genetic messages dispatched from the DNA in the nucleus. All these processes require energy, which mitochondria supply in the form of ATP.

Cellular functions arise from cellular order: The cell is a living unit greater than the sum of its parts. The cell in Figure 7.31 is a good example of integration of cellular processes, seen from the outside. But what about the internal organization of a cell? As you proceed in your study of biology to consider different cellular processes, it will be helpful to try to visualize the architecture and furnishings inside a cell. **Figure 7.32** is designed to help you get a sense of the relative sizes and organization of important biological molecules and macromolecules, along with cellular structures and organelles. As you study this figure, see if you can shrink yourself down to the size of a protein and contemplate your surroundings.

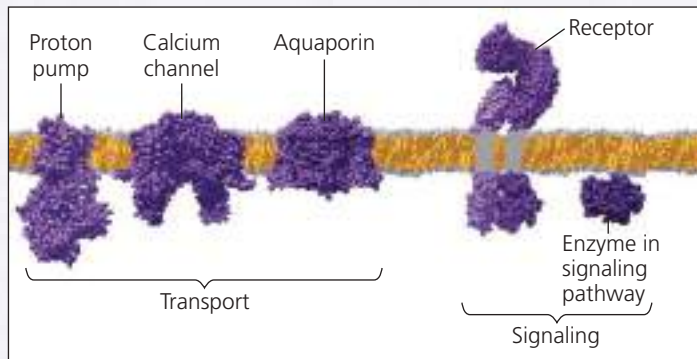
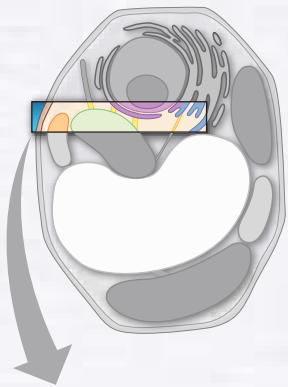
CONCEPT CHECK 7.8

1. *Colpidium colpoda* is a unicellular eukaryote that lives in freshwater, eats bacteria, and moves by cilia (see Figure 7.23b). Describe how the parts of this cell work together in the functioning of *C. colpoda*, including as many organelles and other cell structures as you can.

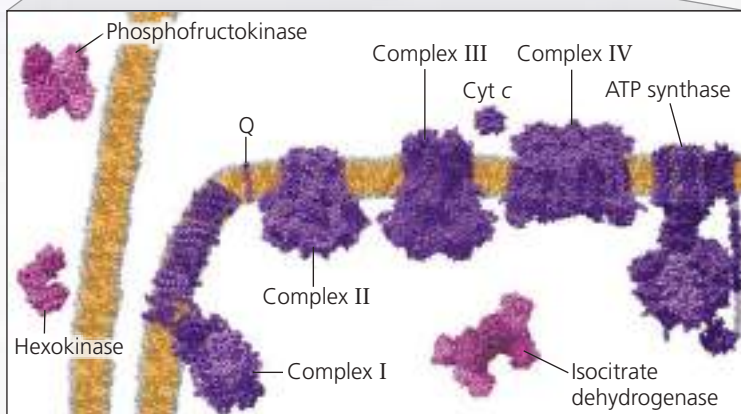
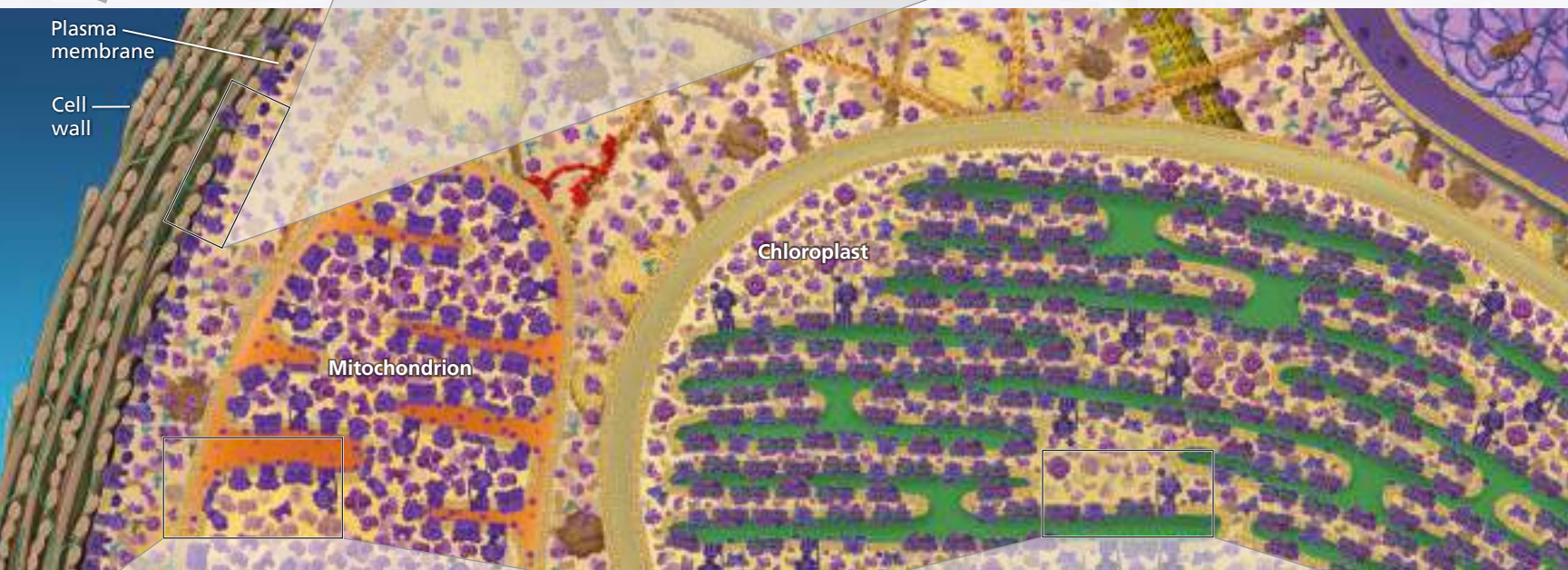
For suggested answers, see Appendix A.

▼ Figure 7.32 Visualizing the Scale of the Molecular Machinery in a Cell

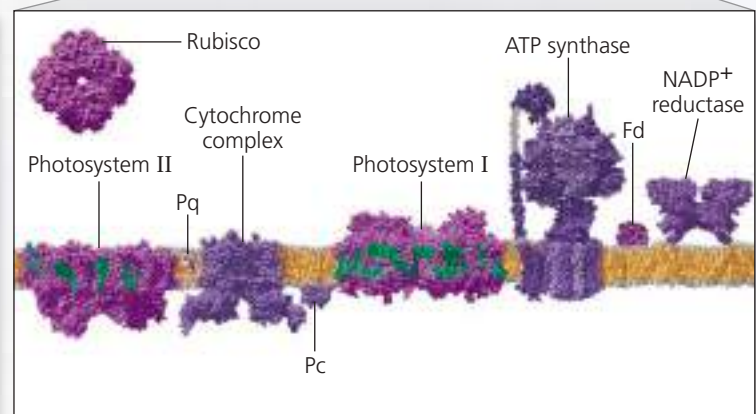
A slice of a plant cell's interior is illustrated in the center panel, with all structures and molecules drawn to scale. Selected molecules and structures are shown above and below, all enlarged by the same factor so you can compare their sizes. All protein and nucleic acid structures are based on data from the Protein Data Bank; regions whose structure has not yet been determined are shown in gray.



Membrane proteins: Proteins embedded in the plasma membrane or other cellular membranes help transport substances across membranes, conduct signals from one side of the membrane to the other, and participate in other crucial cellular functions. Many proteins are able to move within the membrane.

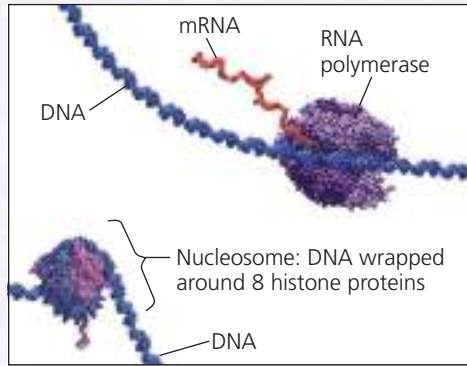


Cellular respiration: Cellular respiration includes many steps, some carried out by individual proteins or protein complexes in the cytoplasm and the mitochondrial matrix. Other proteins and protein complexes, involved in generating ATP from food molecules, form a "chain" in the inner mitochondrial membrane.



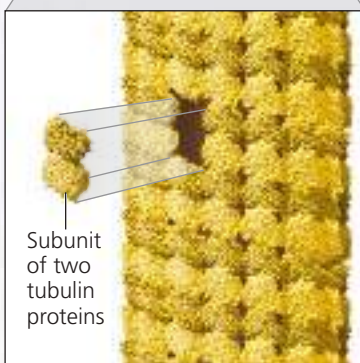
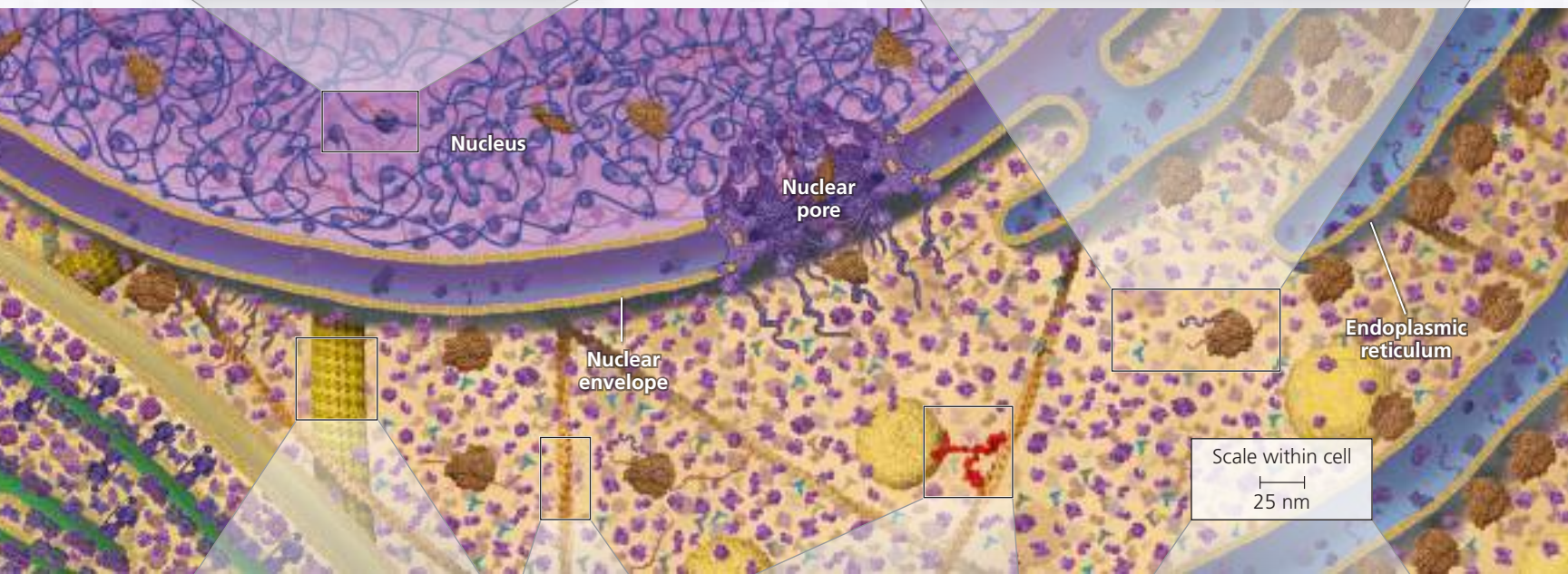
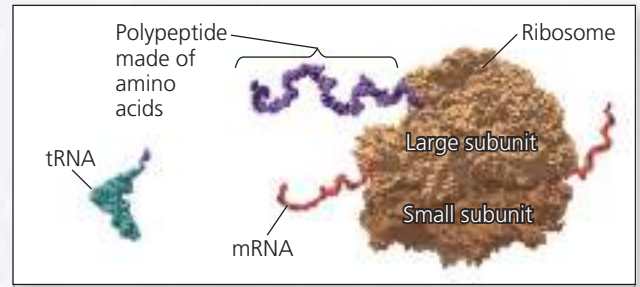
Photosynthesis: Large complexes of proteins with associated nonprotein molecules are embedded in chloroplast membranes. Together, they can trap light energy in molecules that are later used by other proteins inside the chloroplast to make sugars. This is the basis for all life on the planet.

Transcription: In the nucleus, the information contained in a DNA sequence is transferred to messenger RNA (mRNA) by an enzyme called RNA polymerase. After their synthesis, mRNA molecules leave the nucleus via nuclear pores.



Nuclear pore: The nuclear pore complex regulates molecular traffic in and out of the nucleus, which is bounded by a double membrane. Among the largest structures that pass through the pore are the ribosomal subunits, which are built in the nucleus.

Translation: In the cytoplasm, the information in mRNA is used to assemble a polypeptide with a specific sequence of amino acids. Both transfer RNA (tRNA) molecules and a ribosome play a role. The eukaryotic ribosome, which includes a large subunit and a small subunit, is a colossal complex composed of four large ribosomal RNA (rRNA) molecules and more than 80 proteins. Through transcription and translation, the nucleotide sequence of DNA determines the amino acid sequence of a polypeptide, via the intermediary mRNA.

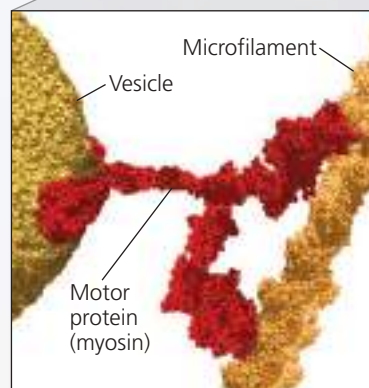


Microtubule

Subunit of two tubulin proteins



Microfilament



Microfilament
Vesicle
Motor protein (myosin)

Cytoskeleton: Cytoskeletal structures are polymers of protein subunits. Microtubules are hollow structural rods made of tubulin protein subunits, while microfilaments are cables that have two chains of actin proteins wound around each other.

Motor proteins: Responsible for transport of vesicles and movement of organelles within the cell. This requires energy, often provided by ATP hydrolysis.

Scale within cell
25 nm

25 nm
Scale of enlarged structures

- 1 List the following structures from largest to smallest: proton pump, nuclear pore, Cyt c, ribosome.
- 2 Considering the structures of a nucleosome and of RNA polymerase, speculate about what must happen before RNA polymerase can transcribe the DNA wrapped around the histone proteins of a nucleosome.
- 3 Find another myosin motor protein walking on a microfilament in this figure. What organelle is being moved by that myosin protein?



Instructors: Additional questions related to this Visualizing Figure can be assigned in MasteringBiology.

7 Chapter Review

Go to **MasteringBiology™** for Videos, Animations, Vocab Self-Quiz, Practice Tests, and more in the Study Area.

SUMMARY OF KEY CONCEPTS

CONCEPT 7.1

Biologists use microscopes and biochemistry to study cells (pp. 164–167)

- Improvements in microscopy that affect the parameters of magnification, resolution, and contrast have catalyzed progress in the study of cell structure. **Light microscopy** (LM) and **electron microscopy** (EM), as well as other types, remain important tools.
- Cell biologists can obtain pellets enriched in particular cellular components by centrifuging disrupted cells at sequential speeds, a process known as **cell fractionation**.

? How do microscopy and biochemistry complement each other to reveal cell structure and function?



VOCAB
SELF-QUIZ
goo.gl/Rn5Uax





CONCEPT 7.2

Eukaryotic cells have internal membranes that compartmentalize their functions (pp. 167–172)

- All cells are bounded by a **plasma membrane**.
- Prokaryotic cells** lack nuclei and other membrane-enclosed **organelles**, while **eukaryotic cells** have internal membranes that compartmentalize cellular functions.
- The surface-to-volume ratio is an important parameter affecting cell size and shape.
- Plant and animal cells have most of the same organelles: a nucleus, endoplasmic reticulum, Golgi apparatus, and mitochondria. Chloroplasts are present only in cells of photosynthetic eukaryotes.

? Explain how the compartmental organization of a eukaryotic cell contributes to its biochemical functioning.


	Cell Component	Structure	Function
CONCEPT 7.3 The eukaryotic cell's genetic instructions are housed in the nucleus and carried out by the ribosomes (pp. 172–174) ? Describe the relationship between the nucleus and ribosomes.	Nucleus 	Surrounded by nuclear envelope (double membrane) perforated by nuclear pores; nuclear envelope continuous with endoplasmic reticulum (ER)	Houses chromosomes, which are made of chromatin (DNA and proteins); contains nucleoli, where ribosomal subunits are made; pores regulate entry and exit of materials
	Ribosome 	Two subunits made of ribosomal RNAs and proteins; can be free in cytosol or bound to ER	Protein synthesis
CONCEPT 7.4 The endomembrane system regulates protein traffic and performs metabolic functions (pp. 174–178) ? Describe the key role played by transport vesicles in the endomembrane system.	Endoplasmic reticulum (ER) 	Extensive network of membrane-bounded tubules and sacs; membrane separates lumen from cytosol; continuous with nuclear envelope	Smooth ER: synthesis of lipids, metabolism of carbohydrates, Ca ²⁺ storage, detoxification of drugs and poisons Rough ER: aids in synthesis of secretory and other proteins on bound ribosomes; adds carbohydrates to proteins to make glycoproteins; produces new membrane
	Golgi apparatus 	Stacks of flattened membranous sacs; has polarity (<i>cis</i> and <i>trans</i> faces)	Modification of proteins, carbohydrates on proteins, and phospholipids; synthesis of many polysaccharides; sorting of Golgi products, which are then released in vesicles
	Lysosome 	Membranous sac of hydrolytic enzymes (in animal cells)	Breakdown of ingested substances, cell macromolecules, and damaged organelles for recycling
	Vacuole 	Large membrane-bounded vesicle	Digestion, storage, waste disposal, water balance, cell growth, and protection

	Cell Component	Structure	Function
CONCEPT 7.5 Mitochondria and chloroplasts change energy from one form to another (pp. 179–182)  What does the endosymbiont theory propose as the origin for mitochondria and chloroplasts? Explain.	Mitochondrion 	Bounded by double membrane; inner membrane has infoldings	Cellular respiration
	Chloroplast 	Typically two membranes around fluid stroma, which contains thylakoids stacked into grana	Photosynthesis (chloroplasts are in cells of photosynthetic eukaryotes, including plants)
	Peroxisome 	Specialized metabolic compartment bounded by a single membrane	Contains enzymes that transfer H atoms from substrates to oxygen, producing H ₂ O ₂ (hydrogen peroxide), which is converted to H ₂ O.

CONCEPT 7.6

The cytoskeleton is a network of fibers that organizes structures and activities in the cell (pp. 182–188)


- The **cytoskeleton** functions in structural support for the cell and in motility and signal transmission.
- Microtubules** shape the cell, guide organelle movement, and separate chromosomes in dividing cells. **Cilia** and **flagella** are motile appendages containing microtubules. Primary cilia also play sensory and signaling roles. **Microfilaments** are thin rods that function in muscle contraction, amoeboid movement, **cytoplasmic streaming**, and support of microvilli. **Intermediate filaments** support cell shape and fix organelles in place.

 Describe the role of motor proteins inside the eukaryotic cell and in whole-cell movement.

CONCEPT 7.7

Extracellular components and connections between cells help coordinate cellular activities (pp. 188–191)


- Plant **cell walls** are made of cellulose fibers embedded in other polysaccharides and proteins.
- Animal cells secrete glycoproteins and proteoglycans that form the **extracellular matrix (ECM)**, which functions in support, adhesion, movement, and regulation.
- Cell junctions connect neighboring cells. Plants have **plasmodesmata** that pass through adjoining cell walls. Animal cells have **tight junctions**, **desmosomes**, and **gap junctions**.

 Compare the structure and functions of a plant cell wall and the extracellular matrix of an animal cell.


CONCEPT 7.8

A cell is greater than the sum of its parts (pp. 191–193)

- Many components work together in a functioning cell.

 When a cell ingests a bacterium, what role does the nucleus play?

TEST YOUR UNDERSTANDING

 Multiple-choice Self-Quiz questions 1–5 can be found in the Study Area in MasteringBiology.

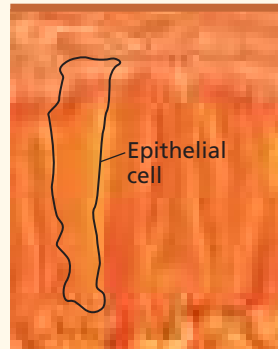
6. **DRAW IT** From memory, draw two eukaryotic cells. Label the structures listed here and show any physical connections between the internal structures of each cell: nucleus, rough ER, smooth ER, mitochondrion, centrosome, chloroplast, vacuole, lysosome, microtubule, cell wall, ECM,



microfilament, Golgi apparatus, intermediate filament, plasma membrane, peroxisome, ribosome, nucleolus, nuclear pore, vesicle, flagellum, microvilli, plasmodesma.


- EVOLUTION CONNECTION** (a) What cell structures best reveal evolutionary unity? (b) Provide an example of diversity related to specialized cellular modifications.
- SCIENTIFIC INQUIRY** Suppose you wish to separate two cellular proteins, A and B. Protein A binds with DNA and is found in the chromatin complex. Protein B binds with RNA and is found in nucleoli. How would you separate cell fractions containing protein A and protein B? Explain the rationale behind your method.
- WRITE ABOUT A THEME: ORGANIZATION** Considering some of the characteristics that define life and drawing on your knowledge of cellular structures and functions, write a short essay (100–150 words) that discusses this statement: Life is an emergent property that appears at the level of the cell. (See Concept 1.1.)

10. SYNTHESIZE YOUR KNOWLEDGE



The cells in this SEM are epithelial cells from the small intestine. Discuss how aspects of their structure contribute to their specialized functions of nutrient absorption and as a barrier between the intestinal contents and the blood supply on the other side of the sheet of epithelial cells.

For selected answers, see Appendix A.

 For additional practice questions, check out the **Dynamic Study Modules** in MasteringBiology. You can use them to study on your smartphone, tablet, or computer anytime, anywhere!